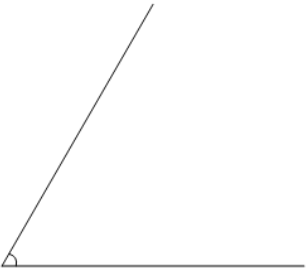




Math worksheet on 'Angles - Estimating (true/false) (Level 2)'. Part of a broader unit on 'Geometry - Angle Basics'

Learn online: [app.mobius.academy/math/units/geometry\\_angle\\_basics/](http://app.mobius.academy/math/units/geometry_angle_basics/)

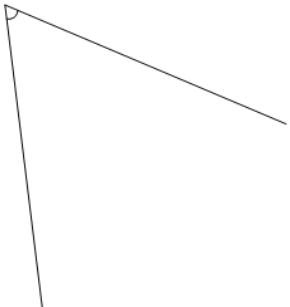
**2**



Is the displayed angle equal to 105°?

<b>a</b>	It is not 105°
<b>b</b>	It is 105°

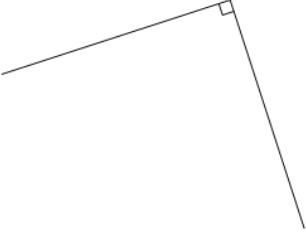
**3**



Is the displayed angle equal to 60°?

<b>a</b>	It is 60°
<b>b</b>	It is not 60°


**4**



Is the displayed angle equal to 30°?

<b>a</b>	It is 30°
<b>b</b>	It is not 30°


**5**



Is the displayed angle equal to 45°?

<b>a</b>	It is not 45°
<b>b</b>	It is 45°

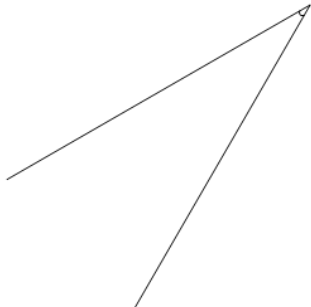
**6**



Is the displayed angle equal to 90°?

<b>a</b>	It is 90°
<b>b</b>	It is not 90°

**7**



Is the displayed angle equal to 30°?

<b>a</b>	It is not 30°
<b>b</b>	It is 30°