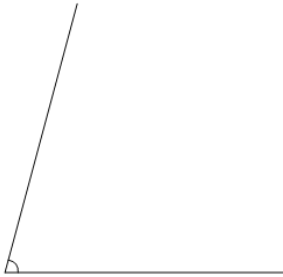




Math worksheet on 'Angles - Estimating (degrees) (Level 1)'. Part of a broader unit on 'Geometry - Angle Basics'

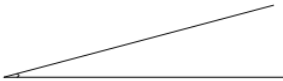
Learn online: app.mobius.academy/math/units/geometry_angle_basics/

1 Estimate the angle in degrees



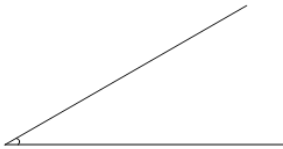
| | | |
|----------|----------|----------|
| a | b | c |
| 75° | 235° | 175° |
| d | e | f |
| 5° | 25° | 165° |

2 Estimate the angle in degrees




| | | |
|----------|----------|----------|
| a | b | c |
| 185° | 95° | 175° |
| d | e | f |
| 85° | 165° | 15° |

3 Estimate the angle in degrees




| | | |
|----------|----------|----------|
| a | b | c |
| 120° | 130° | 90° |
| d | e | f |
| 170° | 140° | 30° |

4 Estimate the angle in degrees



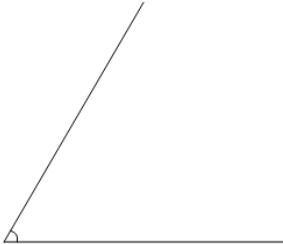
| | | |
|----------|----------|----------|
| a | b | c |
| 180° | 250° | 260° |
| d | e | f |
| 90° | 150° | 10° |

5 Estimate the angle in degrees



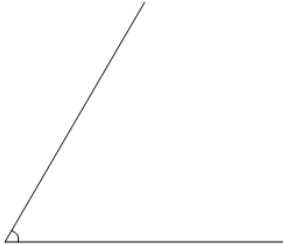
| | | |
|----------|----------|----------|
| a | b | c |
| 180° | 190° | 20° |
| d | e | f |
| 30° | 90° | 150° |

6 Estimate the angle in degrees



| | | |
|----------|----------|----------|
| a | b | c |
| 220° | 170° | 230° |
| d | e | f |
| 210° | 60° | 10° |

7 Estimate the angle in degrees



| | | |
|----------|----------|----------|
| a | b | c |
| 10° | 200° | 60° |
| d | e | f |
| 170° | 110° | 150° |