

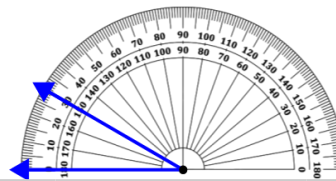


Math worksheet on 'Measure Angle With Protractor - Under 90 Degrees (Negative) (Level 1)'. Part of a broader unit on 'Geometry - Angles and Transformations - Intro'

Learn online:

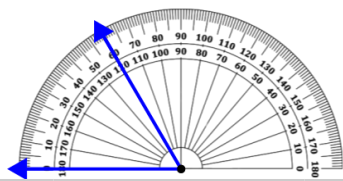
app.mobius.academy/math/units/geometry_angles_and_transformations/

1 Measure the angle using the protractor



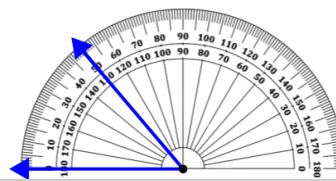
a	b	c	d	e	f
145°	5°	105°	190°	30°	180°

2 Measure the angle using the protractor



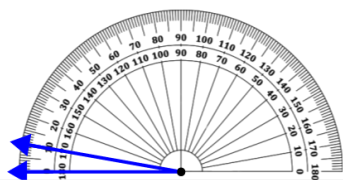
a	b	c	d	e	f
185°	105°	205°	90°	60°	180°

3 Measure the angle using the protractor



a	b	c	d	e	f
170°	175°	180°	20°	65°	50°

4 Measure the angle using the protractor



a	b	c	d	e	f
100°	80°	10°	145°	60°	55°