

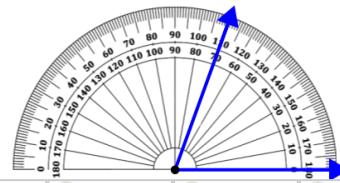


Math worksheet on 'Measure Angle With Protractor - Under 90 Degrees (Positive) (Level 1)'. Part of a broader unit on 'Geometry - Angles and Transformations - Intro'

Learn online:

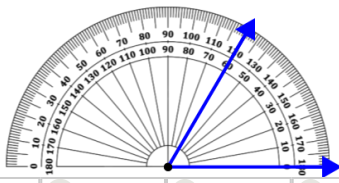
app.mobius.academy/math/units/geometry_angles_and_transformations/

1 Measure the angle using the protractor



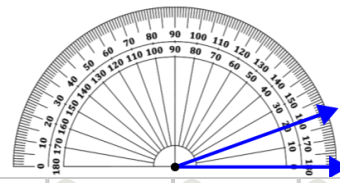
a	b	c	d	e	f
145°	115°	70°	160°	170°	175°

2 Measure the angle using the protractor



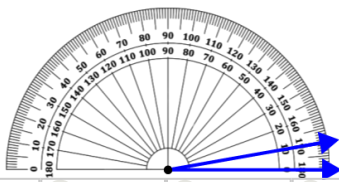
a	b	c	d	e	f
25°	5°	215°	155°	235°	60°

3 Measure the angle using the protractor



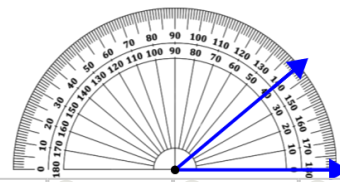
a	b	c	d	e	f
150°	20°	125°	155°	80°	145°

4 Measure the angle using the protractor



a	b	c	d	e	f
10°	145°	100°	165°	65°	125°

5 Measure the angle using the protractor



a	b	c	d	e	f
75°	210°	185°	165°	40°	15°