

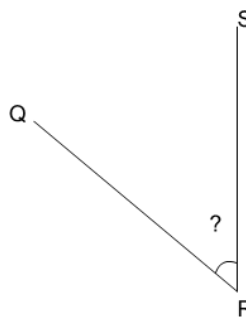


Math worksheet on 'Angles - Naming - Diagram to ABC Form (Simple) on an Angle (Level 1)'. Part of a broader unit on 'Geometry - Angles and Transformations - Practice'

Learn online:

app.mobius.academy/math/units/geometry_angles_and_transformations_practice/

1



How would this angle be named in the $\angle ABC$ naming convention?

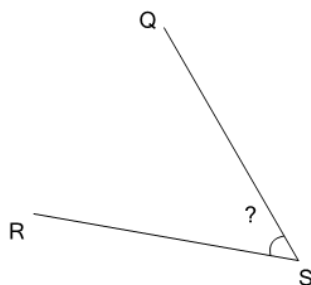
a

$\angle RQS$

b

$\angle SRQ$

2



How would this angle be named in the $\angle ABC$ naming convention?

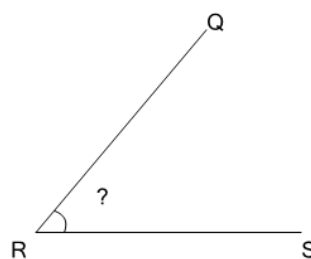
a

$\angle RSQ$

b

$\angle SRQ$

3



How would this angle be named in the $\angle ABC$ naming convention?

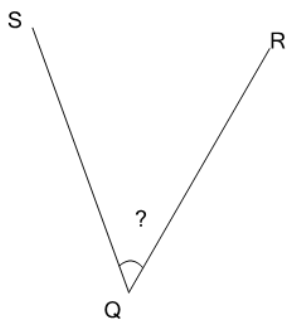
a

$\angle SQR$

b

$\angle QRS$

4



How would this angle be named in the $\angle ABC$ naming convention?

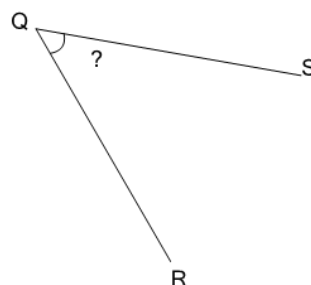
a

$\angle SQR$

b

$\angle RSQ$

5



How would this angle be named in the $\angle ABC$ naming convention?

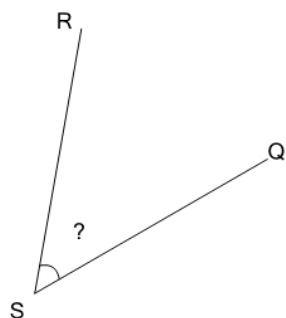
a

$\angle RQS$

b

$\angle QSR$

6



How would this angle be named in the $\angle ABC$ naming convention?

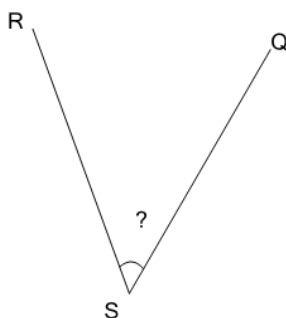
a

$\angle QSR$

b

$\angle QRS$

7



How would this angle be named in the $\angle ABC$ naming convention?

a

$\angle SQR$

b

$\angle RSQ$