

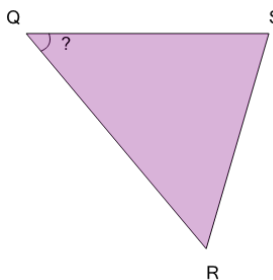


Math worksheet on 'Angles - Naming - Diagram to ABC Form on a Triangle (Level 1)'. Part of a broader unit on 'Geometry - Angles and Transformations - Practice'

Learn online:

app.mobius.academy/math/units/geometry_angles_and_transformations_practice/

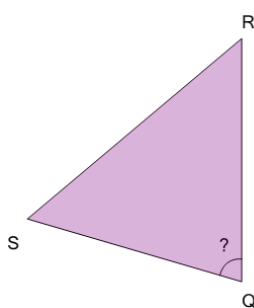
1



What is the name of the angle marked with '?' on this triangle?

a	<RSQ	b	<RQS
c	<QRS	d	<QSR
e	<SRQ		

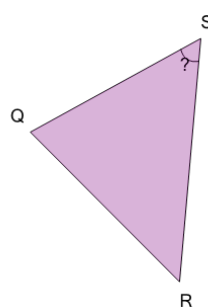
2



What is the name of the angle marked with '?' on this triangle?

a	<QRS	b	<SRQ
c	<RSQ	d	<QSR
e	<SQR		

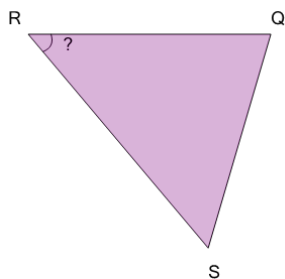
3



What is the name of the angle marked with '?' on this triangle?

a	<RQS	b	<SRQ
c	<SQR	d	<QRS
e	<RSQ		

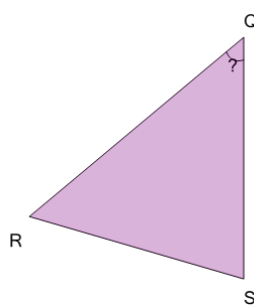
4



What is the name of the angle marked with '?' on this triangle?

a	<SQR	b	<RSQ
c	<QRS	d	<RQS
e	<QSR		

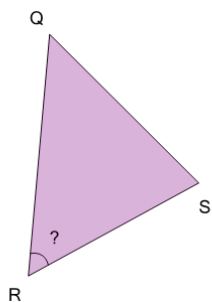
5



What is the name of the angle marked with '?' on this triangle?

a	<RSQ	b	<QRS
c	<QSR	d	<SRQ
e	<RQS		

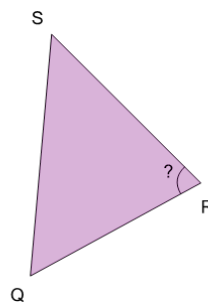
6



What is the name of the angle marked with '?' on this triangle?

a	<RSQ	b	<RQS
c	<SQR	d	<QSR
e	<QRS		

7



What is the name of the angle marked with '?' on this triangle?

a	<SRQ	b	<RQS
c	<SQR	d	<RSQ
e	<QSR		