

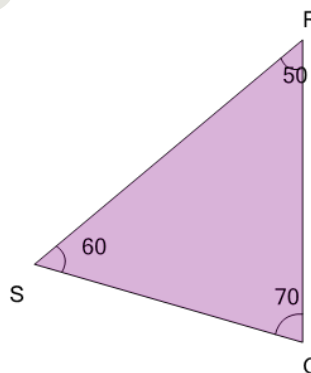


Math worksheet on 'Angles - Naming - Degrees to ABC Form (Simple) on a Triangle (Level 1)'. Part of a broader unit on 'Geometry - Angles and Transformations - Practice'

Learn online:

app.mobius.academy/math/units/geometry_angles_and_transformations_practice/

1



The angle that is 50° would be called what?

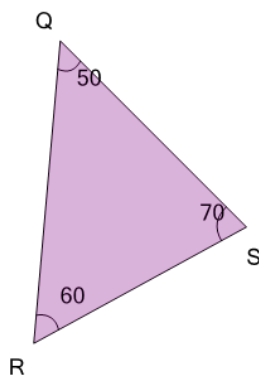
a

<RQS

b

<QRS

2



The angle that is 50° would be called what?

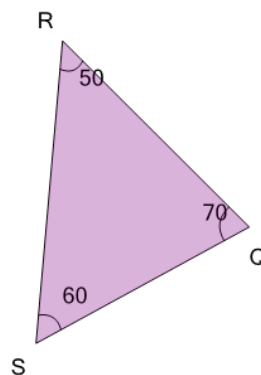
a

<QSR

b

<SQR

3



The angle that is 60° would be called what?

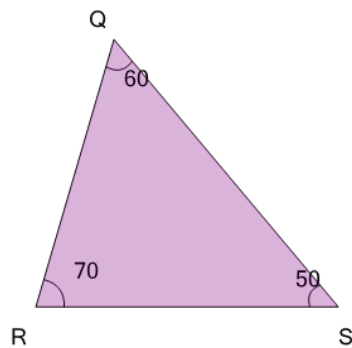
a

<RQS

b

<RSQ

4



The angle that is 50° would be called what?

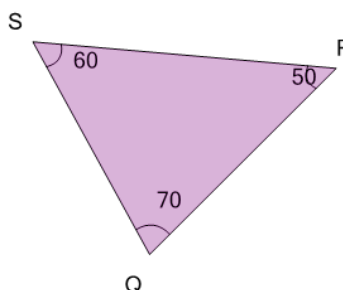
a

<SQR

b

<QSR

5



The angle that is 60° would be called what?

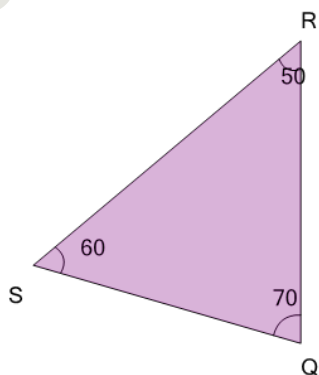
a

<QSR

b

<SRQ

6



The angle that is 70° would be called what?

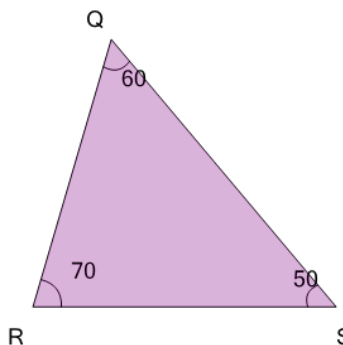
a

<RSQ

b

<RQS

7



The angle that is 60° would be called what?

a

<QRS

b

<SQR