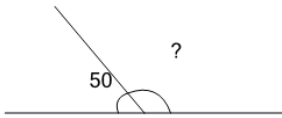




Math worksheet on 'Angles - Remainder of 180 Degree Angle (Level 1)'. Part of a broader unit on 'Geometry - Angle Basics'

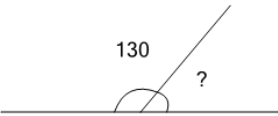
Learn online: app.mobius.academy/math/units/geometry_angle_basics/

1 A 180° angle is made up of a 50° angle and another angle. How many degrees is the other angle?



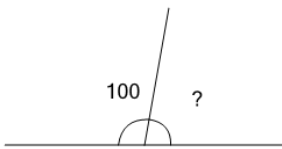
a	b	c
105°	115°	125°
d	e	f
130°	145°	120°

2 A 180° angle is made up of a 130° angle and another angle. How many degrees is the other angle?



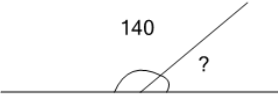
a	b	c
50°	55°	35°
d	e	f
70°	65°	45°

3 A 180° angle is made up of a 100° angle and another angle. How many degrees is the other angle?



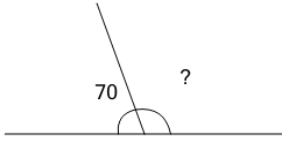
a	b	c
65°	60°	100°
d	e	f
75°	85°	80°

4 A 180° angle is made up of a 140° angle and another angle. How many degrees is the other angle?



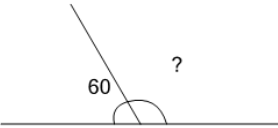
a	b	c
35°	15°	40°
d	e	f
45°	30°	50°

5 A 180° angle is made up of a 70° angle and another angle. How many degrees is the other angle?



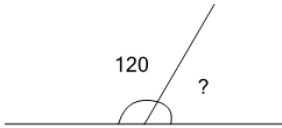
a	b	c
110°	105°	130°
d	e	f
100°	85°	90°

6 A 180° angle is made up of a 60° angle and another angle. How many degrees is the other angle?



a	b	c
95°	115°	100°
d	e	f
120°	105°	135°

7 A 180° angle is made up of a 120° angle and another angle. How many degrees is the other angle?



a	b	c
70°	55°	65°
d	e	f
75°	40°	60°