



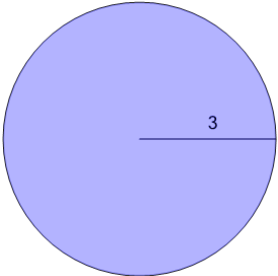
Math worksheet on 'Area of a Circle (with calculator) (Level 1)'. Part of a broader unit on 'Geometry - Surface Area of 3D Shapes - Intro'

Learn online:

app.mobius.academy/math/units/geometry_surface_area_basic_shapes_intro/

1

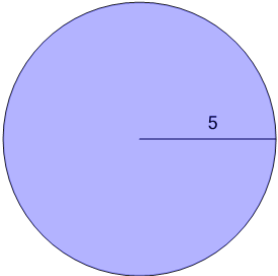
Find the area



a	87.96	b	28.27
c	18.85	d	18
e	9	f	9.42

2

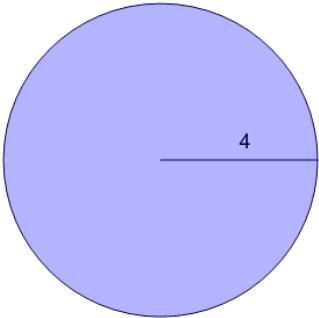
Find the area



a	31.42	b	15.71
c	150.8	d	25
e	50	f	78.54

3

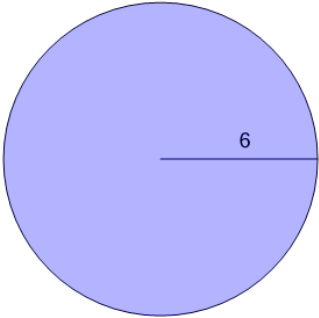
Find the area



a	16	b	153.94
c	50.27	d	131.95
e	150.8	f	32

4

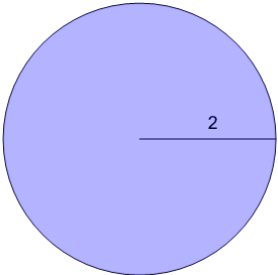
Find the area



a	197.92	b	36
c	72	d	37.7
e	18.85	f	113.1

5

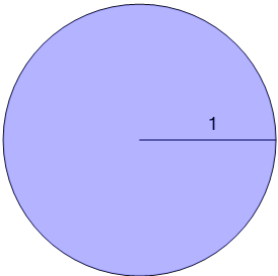
Find the area



a	12.57	b	50.27
c	75.4	d	28.27
e	4	f	8

6

Find the area



a	2	b	3.14
c	6.28	d	1
e	12.57	f	37.7