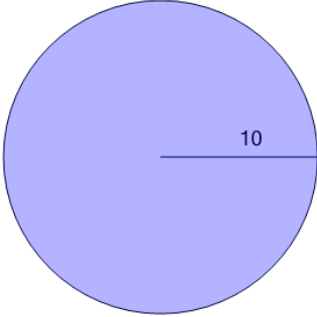




Math worksheet on 'Area of a Circle (with calculator) (Level 2)'. Part of a broader unit on 'Geometry - Circle Area - Intro'

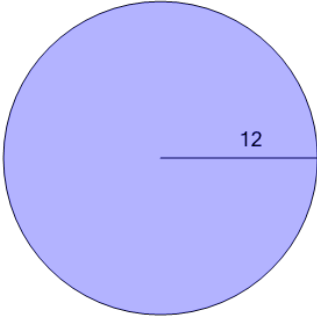
Learn online: app.mobius.academy/math/units/geometry_circles_area_intro/

1 Find the area



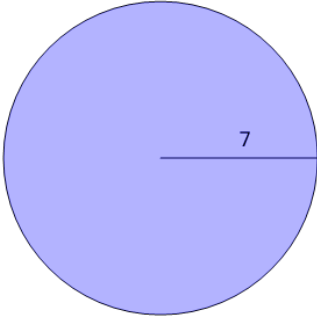
a	527.79	b	490.09
c	31.42	d	62.83
e	314.16	f	200

2 Find the area



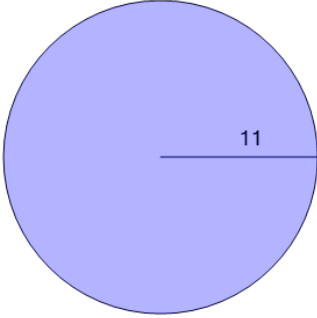
a	615.75	b	144
c	288	d	75.4
e	612.61	f	452.39

3 Find the area



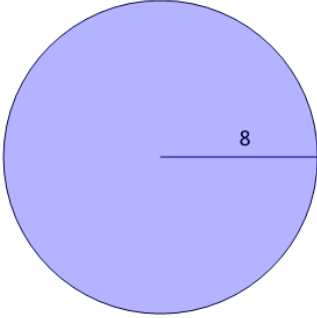
a	49	b	43.98
c	98	d	153.94
e	282.74	f	226.19

4 Find the area



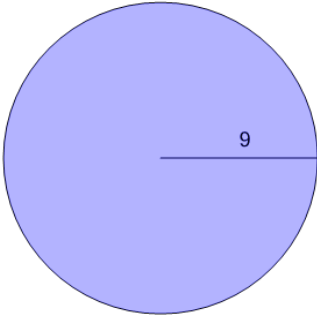
a	380.13	b	615.75
c	34.56	d	121
e	452.39	f	242

5 Find the area



a	311.02	b	64
c	50.27	d	201.06
e	25.13	f	254.47

6 Find the area



a	376.99	b	254.47
c	81	d	162
e	56.55	f	314.16