

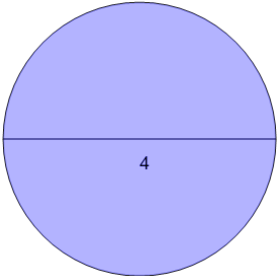


Math worksheet on 'Area of a Circle from Diameter (with calculator) (Level 1)'. Part of a broader unit on 'Geometry - Circle Area - Intro'

Learn online: app.mobius.academy/math/units/geometry_circles_area_intro/

1

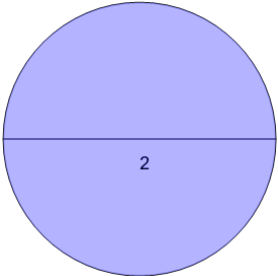
Find the area



a	4	b	12.57
c	28.27	d	94.25
e	8	f	56.55

2

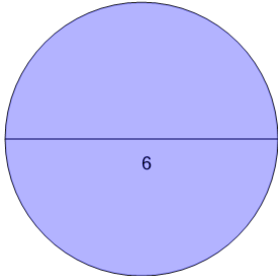
Find the area



a	6.28	b	2
c	1	d	18.85
e	25.13	f	3.14

3

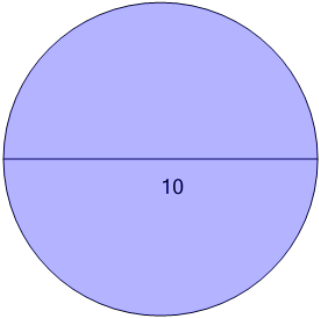
Find the area



a	18.85	b	87.96
c	9.42	d	9
e	18	f	28.27

4

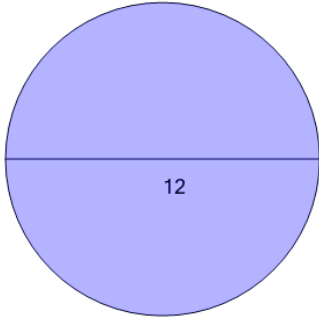
Find the area



a	197.92	b	78.54
c	31.42	d	150.8
e	15.71	f	50

5

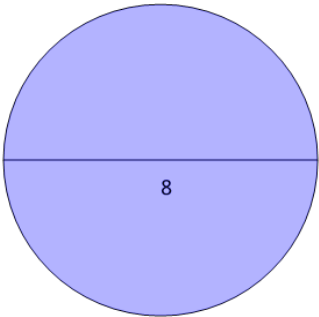
Find the area



a	197.92	b	72
c	37.7	d	201.06
e	36	f	113.1

6

Find the area



a	78.54	b	131.95
c	32	d	16
e	50.27	f	25.13