

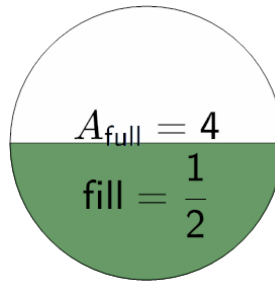


Math worksheet on 'Area of a Part Circle - Full Area and Fraction to Part Area (Decimal) (Level 1)'. Part of a broader unit on 'Geometry - Circle Partial Area and Circumference - Intro'

Learn online:

app.mobius.academy/math/units/geometry_circles_partial_perimeter_area_intro/

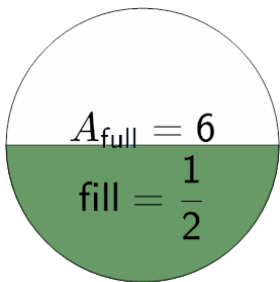
1



The area of the full circle is 4. What is the area of the green shaded 1/2 sector ?

a	4	b	2
c	5	d	8
e	9	f	6

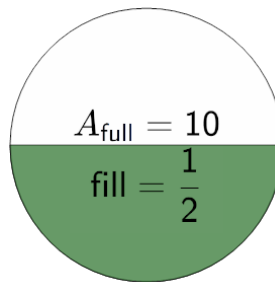
2



The area of the full circle is 6. What is the area of the green shaded 1/2 sector ?

a	5	b	9
c	12	d	3
e	4	f	11

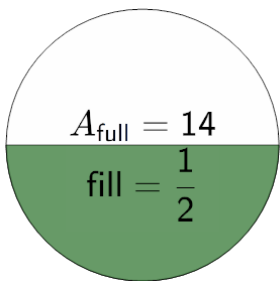
3



The area of the full circle is 10. What is the area of the green shaded 1/2 sector ?

a	3	b	10
c	5	d	13
e	1	f	6

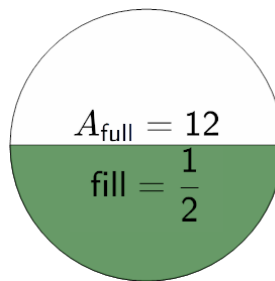
4



The area of the full circle is 14. What is the area of the green shaded 1/2 sector ?

a	14	b	4
c	7	d	8
e	16	f	1

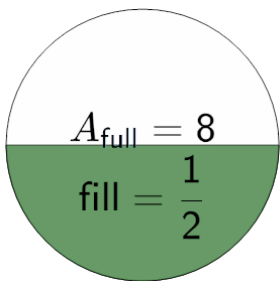
5



The area of the full circle is 12. What is the area of the green shaded 1/2 sector ?

a	12	b	6
c	14	d	13
e	5	f	7

6



The area of the full circle is 8. What is the area of the green shaded 1/2 sector ?

a	2	b	8
c	13	d	4
e	5	f	3