

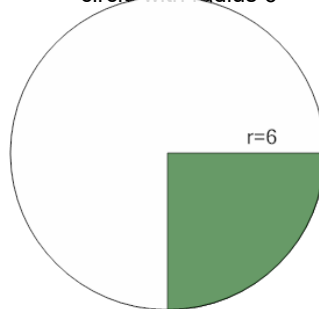


Math worksheet on 'Area of a Circle Sector From Fraction to Area (Closest Integer) (Level 1)'. Part of a broader unit on 'Geometry - Circle Area, Sectors and Donuts - Intro'

Learn online:

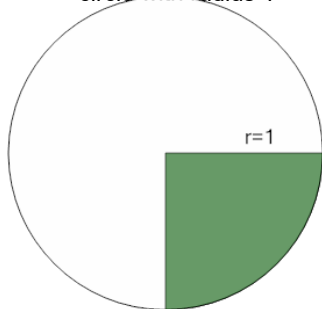
app.mobius.academy/math/units/geometry_circles_sector_donut_area_logic_intro/

1 Find the area (to the closest integer) of the green shaded sector that covers $\frac{1}{4}$ of the circle with radius 6



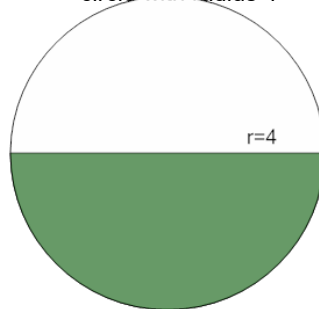
a	b	c
24	30	18
d	e	f
36	28	16

2 Find the area (to the closest integer) of the green shaded sector that covers $\frac{1}{4}$ of the circle with radius 1



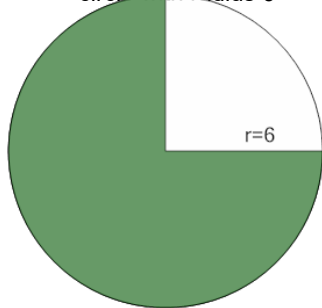
a	b	c
9	1	2
d	e	f
7	10	3

3 Find the area (to the closest integer) of the green shaded sector that covers $\frac{1}{2}$ of the circle with radius 4



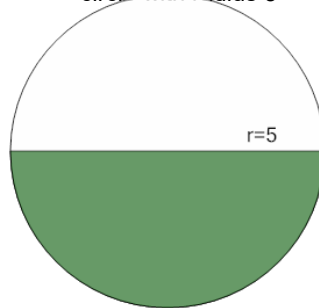
a	b	c
25	19	7
d	e	f
35	9	43

4 Find the area (to the closest integer) of the green shaded sector that covers $\frac{3}{4}$ of the circle with radius 6



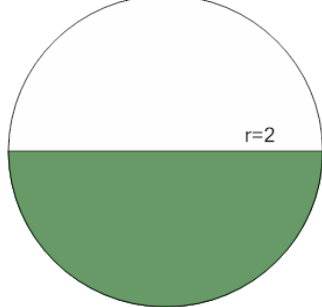
a	b	c
85	125	109
d	e	f
77	13	29

5 Find the area (to the closest integer) of the green shaded sector that covers $\frac{1}{2}$ of the circle with radius 5



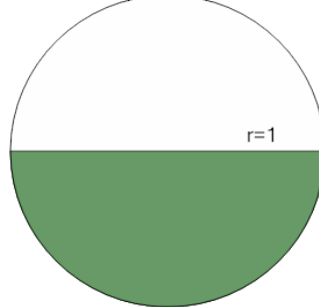
a	b	c
54	66	33
d	e	f
42	39	18

6 Find the area (to the closest integer) of the green shaded sector that covers $\frac{1}{2}$ of the circle with radius 2



a	b	c
1	15	2
d	e	f
8	5	6

7 Find the area (to the closest integer) of the green shaded sector that covers $\frac{1}{2}$ of the circle with radius 1



a	b	c
9	2	7
d	e	f
4	8	1