

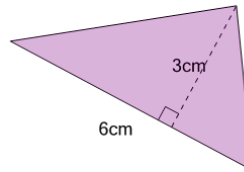


Math worksheet on 'Area of a Non-Right Triangle (Level 2)'. Part of a broader unit on 'Area Intro'

Learn online: app.mobius.academy/math/units/area_intro/

1

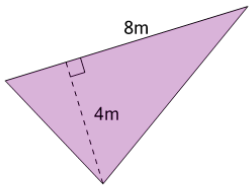
Find the area of the triangle



- | | | | |
|---|-----------------|---|-----------------|
| a | 9cm^2 | b | 32cm^2 |
| c | 18cm^2 | d | 4cm^2 |
| | | | |

2

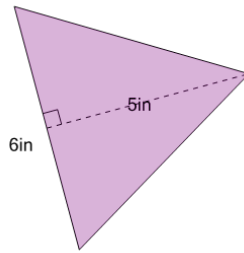
Find the area of the triangle



- | | | | |
|---|----------------|---|----------------|
| a | 16m^2 | b | 24m^2 |
| c | 32m^2 | d | 4m^2 |
| | | | |

3

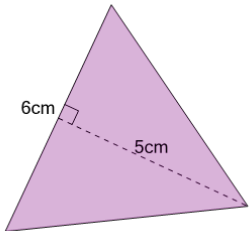
Find the area of the triangle



- | | | | |
|---|------------------|---|-----------------|
| a | 2.4in^2 | b | 21in^2 |
| c | 15in^2 | d | 22in^2 |
| | | | |

4

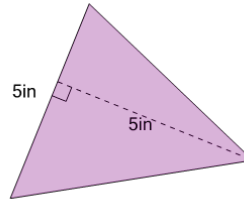
Find the area of the triangle



- | | | | |
|---|-----------------|---|------------------|
| a | 15cm^2 | b | 2.4cm^2 |
| c | 30cm^2 | d | 22cm^2 |
| | | | |

5

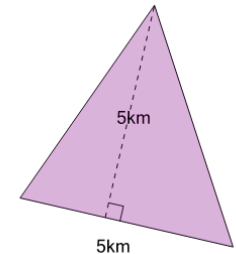
Find the area of the triangle



- | | | | |
|---|-------------------|---|-------------------|
| a | 17.5in^2 | b | 2in^2 |
| c | 20in^2 | d | 12.5in^2 |
| | | | |

6

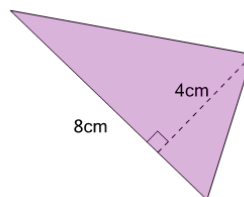
Find the area of the triangle



- | | | | |
|---|-------------------|---|-----------------|
| a | 12.5km^2 | b | 48km^2 |
| c | 20km^2 | d | 15km^2 |
| | | | |

7

Find the area of the triangle



- | | | | |
|---|-----------------|---|-----------------|
| a | 24cm^2 | b | 80cm^2 |
| c | 20cm^2 | d | 16cm^2 |
| | | | |