



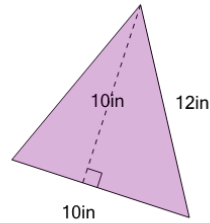
Math worksheet on 'Area of a Non-Right Triangle (Level 3)'. Part of a broader unit on 'Area and Perimeter Complex Shapes'

Learn online:

app.mobius.academy/math/units/area_and_perimeter_complex_shapes/

1

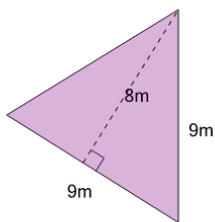
Find the area of the triangle



| | | | |
|---|-----------|---|-----------|
| a | $200in^2$ | b | $50in^2$ |
| c | $132in^2$ | d | $154in^2$ |
| e | $2in^2$ | f | $40in^2$ |

2

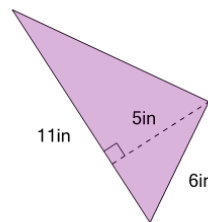
Find the area of the triangle



| | | | |
|---|----------|---|----------|
| a | $108m^2$ | b | $34m^2$ |
| c | $72m^2$ | d | $2.3m^2$ |
| e | $144m^2$ | f | $36m^2$ |

3

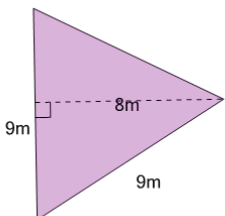
Find the area of the triangle



| | | | |
|---|-----------|---|------------|
| a | $105in^2$ | b | $72in^2$ |
| c | $32in^2$ | d | $27.5in^2$ |
| e | $4.4in^2$ | f | $55in^2$ |

4

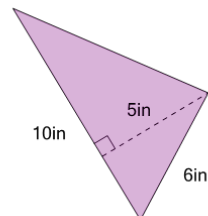
Find the area of the triangle



| | | | |
|---|----------|---|----------|
| a | $120m^2$ | b | $34m^2$ |
| c | $36m^2$ | d | $72m^2$ |
| e | $2.3m^2$ | f | $144m^2$ |

5

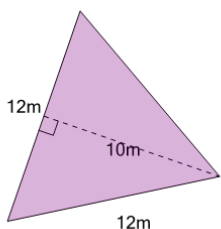
Find the area of the triangle



| | | | |
|---|----------|---|-----------|
| a | $25in^2$ | b | $77in^2$ |
| c | $4in^2$ | d | $100in^2$ |
| e | $30in^2$ | f | $50in^2$ |

6

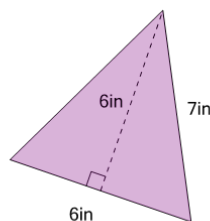
Find the area of the triangle



| | | | |
|---|----------|---|----------|
| a | $120m^2$ | b | $180m^2$ |
| c | $169m^2$ | d | $182m^2$ |
| e | $60m^2$ | f | $156m^2$ |

7

Find the area of the triangle



| | | | |
|---|----------|---|----------|
| a | $2in^2$ | b | $72in^2$ |
| c | $56in^2$ | d | $36in^2$ |
| e | $24in^2$ | f | $18in^2$ |