

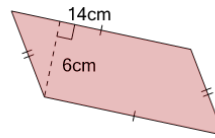


Math worksheet on 'Area of a Parallelogram (Level 2)'. Part of a broader unit on 'Area Intro'

Learn online: app.mobius.academy/math/units/area_intro/

1

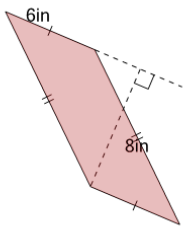
Find the area of the parallelogram



- | | | | |
|---|-----------|---|----------|
| a | $20cm^2$ | b | $84cm^2$ |
| c | $144cm^2$ | d | $12cm^2$ |
| | | | |

2

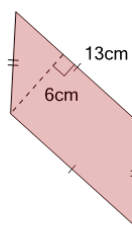
Find the area of the parallelogram



- | | | | |
|---|----------|---|----------|
| a | $14in^2$ | b | $12in^2$ |
| c | $16in^2$ | d | $48in^2$ |
| e | $88in^2$ | | |

3

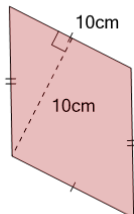
Find the area of the parallelogram



- | | | | |
|---|-----------|---|-----------|
| a | $144cm^2$ | b | $38cm^2$ |
| c | $78cm^2$ | d | $119cm^2$ |
| e | $26cm^2$ | | |

4

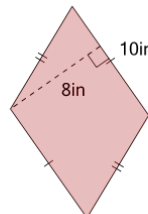
Find the area of the parallelogram



- | | | | |
|---|-----------|---|-----------|
| a | $100cm^2$ | b | $156cm^2$ |
| c | $154cm^2$ | d | $20cm^2$ |
| | | | |

5

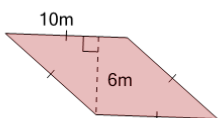
Find the area of the parallelogram



- | | | | |
|---|-----------|---|----------|
| a | $20in^2$ | b | $16in^2$ |
| c | $110in^2$ | d | $80in^2$ |
| | | | |

6

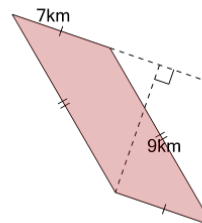
Find the area of the parallelogram



- | | | | |
|---|----------|---|---------|
| a | $104m^2$ | b | $12m^2$ |
| c | $60m^2$ | d | $16m^2$ |
| | | | |

7

Find the area of the parallelogram



- | | | | |
|---|----------|---|----------|
| a | $16km^2$ | b | $14km^2$ |
| c | $18km^2$ | d | $63km^2$ |
| | | | |