




Math worksheet on 'Area of a Rectangle (Level 1)'.
Part of a broader unit on 'Area Intro'

Learn online: app.mobius.academy/math/units/area_intro/

1

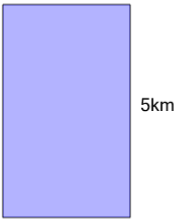
Find the area of this rectangle



a	$48km^2$	b	$14km^2$
c	$12km^2$	d	$7km^2$
e	$28km^2$	f	$8km^2$

2


Find the area of this rectangle



a	$15km^2$	b	$6km^2$
c	$8km^2$	d	$16km^2$
e	$49km^2$	f	$54km^2$

3


Find the area of this rectangle



a	$7in^2$	b	$36in^2$
c	$10in^2$	d	$14in^2$
e	$4in^2$	f	$40in^2$

4

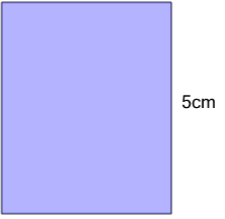
Find the area of this rectangle



a	$16km^2$	b	$35km^2$
c	$8km^2$	d	$15km^2$
e	$10km^2$	f	$45km^2$

5


Find the area of this rectangle



a	$72cm^2$	b	$64cm^2$
c	$10cm^2$	d	$18cm^2$
e	$9cm^2$	f	$20cm^2$

6


Find the area of this rectangle



a	$12ft^2$	b	$20ft^2$
c	$36ft^2$	d	$35ft^2$
e	$6ft^2$	f	$9ft^2$

7

Find the area of this rectangle



a	$25in^2$	b	$20in^2$
c	$72in^2$	d	$81in^2$
e	$10in^2$	f	$63in^2$