

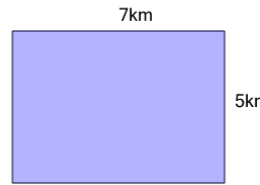


Math worksheet on 'Area of a Rectangle (Level 2)'.
Part of a broader unit on 'Area Intro'

Learn online: app.mobius.academy/math/units/area_intro/

1

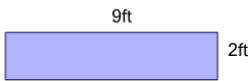
Find the area of this rectangle



- | | | | |
|---|----------|---|----------|
| a | $60km^2$ | b | $24km^2$ |
| c | $14km^2$ | d | $12km^2$ |
| e | $35km^2$ | f | $64km^2$ |

2

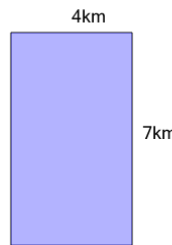
Find the area of this rectangle



- | | | | |
|---|----------|---|----------|
| a | $50ft^2$ | b | $4ft^2$ |
| c | $11ft^2$ | d | $18ft^2$ |
| e | $22ft^2$ | f | $65ft^2$ |

3

Find the area of this rectangle



- | | | | |
|---|----------|---|----------|
| a | $80km^2$ | b | $14km^2$ |
| c | $8km^2$ | d | $22km^2$ |
| e | $11km^2$ | f | $28km^2$ |

4

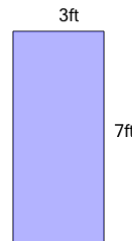
Find the area of this rectangle



- | | | | |
|---|----------|---|----------|
| a | $45ft^2$ | b | $99ft^2$ |
| c | $14ft^2$ | d | $60ft^2$ |
| e | $28ft^2$ | f | $90ft^2$ |

5

Find the area of this rectangle



- | | | | |
|---|----------|---|----------|
| a | $10ft^2$ | b | $36ft^2$ |
| c | $63ft^2$ | d | $21ft^2$ |
| e | $50ft^2$ | f | $14ft^2$ |

6

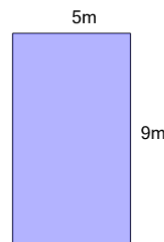
Find the area of this rectangle



- | | | | |
|---|----------|---|----------|
| a | $18in^2$ | b | $36in^2$ |
| c | $8in^2$ | d | $13in^2$ |
| e | $26in^2$ | f | $84in^2$ |

7

Find the area of this rectangle



- | | | | |
|---|---------|---|---------|
| a | $28m^2$ | b | $10m^2$ |
| c | $72m^2$ | d | $14m^2$ |
| e | $18m^2$ | f | $45m^2$ |