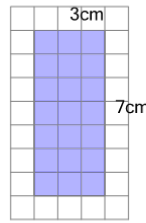




Math worksheet on 'Area of a Rectangle - Concept Intro (Level 2)'. Part of a broader unit on 'Area Intro'

Learn online: [app.mobius.academy/math/units/area\\_intro/](http://app.mobius.academy/math/units/area_intro/)

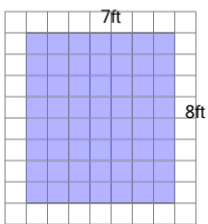
1



Find the number of 1cm by 1cm squares this rectangle covers

- |            |            |
|------------|------------|
| a $77cm^2$ | b $55cm^2$ |
| c $20cm^2$ | d $21cm^2$ |
| e $14cm^2$ | f $50cm^2$ |

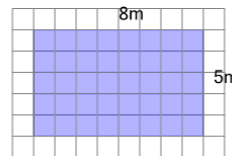
2



Find the number of 1ft by 1ft squares this rectangle covers

- |            |            |
|------------|------------|
| a $16ft^2$ | b $30ft^2$ |
| c $15ft^2$ | d $14ft^2$ |
| e $90ft^2$ | f $56ft^2$ |

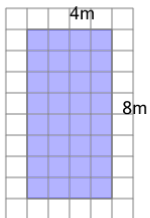
3



Find the number of 1m by 1m squares this rectangle covers

- |           |           |
|-----------|-----------|
| a $40m^2$ | b $81m^2$ |
| c $26m^2$ | d $16m^2$ |
| e $80m^2$ | f $99m^2$ |

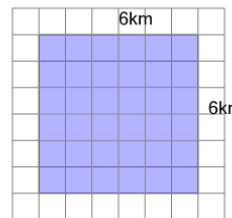
4



Find the number of 1m by 1m squares this rectangle covers

- |           |           |
|-----------|-----------|
| a $24m^2$ | b $32m^2$ |
| c $16m^2$ | d $96m^2$ |
| e $8m^2$  | f $12m^2$ |

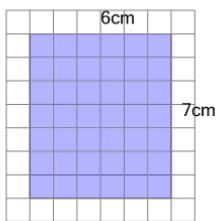
5



Find the number of 1km by 1km squares this rectangle covers

- |            |            |
|------------|------------|
| a $90km^2$ | b $12km^2$ |
| c $24km^2$ | d $36km^2$ |
| e $56km^2$ | f $80km^2$ |

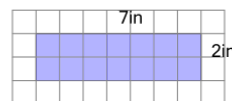
6



Find the number of 1cm by 1cm squares this rectangle covers

- |            |             |
|------------|-------------|
| a $13cm^2$ | b $14cm^2$  |
| c $12cm^2$ | d $100cm^2$ |
| e $26cm^2$ | f $42cm^2$  |

7



Find the number of 1in by 1in squares this rectangle covers

- |            |            |
|------------|------------|
| a $14in^2$ | b $9in^2$  |
| c $60in^2$ | d $4in^2$  |
| e $40in^2$ | f $18in^2$ |