

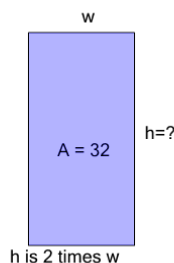


Math worksheet on 'Area of a Rectangle - Side from Area and Side Ratio (Level 1)'. Part of a broader unit on 'Area and Perimeter Logic - Practice'

Learn online:

app.mobius.academy/math/units/area_and_perimeter_geometry_logic_practice/

1

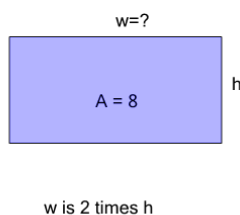


Find the missing side length of this rectangle

a	12	b	4
c	14	d	1
e	8	f	15

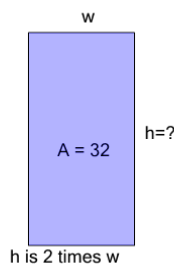
2

Find the missing side length of this rectangle



a	8	b	3
c	11	d	1
e	4	f	10

3

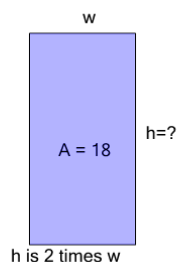


Find the missing side length of this rectangle

a	3	b	8
c	11	d	13
e	4	f	2

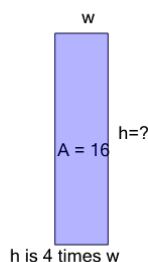
4

Find the missing side length of this rectangle



a	6	b	5
c	1	d	14
e	2	f	10

5

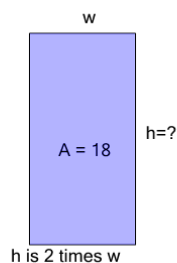


Find the missing side length of this rectangle

a	6	b	5
c	3	d	8
e	12	f	2

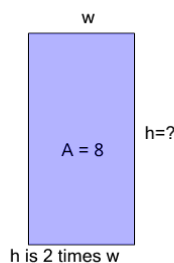
6

Find the missing side length of this rectangle



a	6	b	10
c	8	d	9
e	3	f	12

7



Find the missing side length of this rectangle

a	7	b	3
c	1	d	4
e	5	f	10