

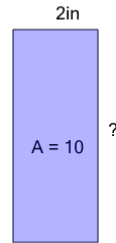


Math worksheet on 'Area of a Rectangle - Side from Area and Side (Level 1)'. Part of a broader unit on 'Area and Perimeter Logic - Practice'

Learn online:

app.mobius.academy/math/units/area_and_perimeter_geometry_logic_practice/

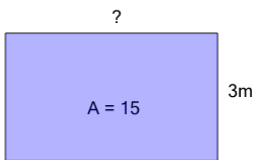
1



Find the missing side length of this rectangle

a	4in	b	1in
c	11in	d	3in
e	5in	f	12in

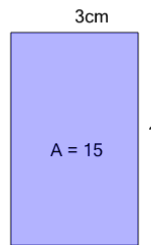
2



Find the missing side length of this rectangle

a	8m	b	14m
c	2m	d	5m
e	9m	f	6m

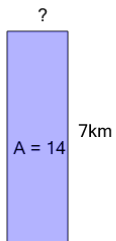
3



Find the missing side length of this rectangle

a	10cm	b	3cm
c	12cm	d	7cm
e	5cm	f	4cm

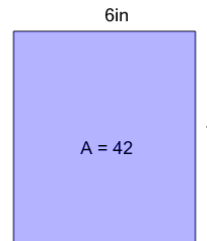
4



Find the missing side length of this rectangle

a	3km	b	1km
c	5km	d	4km
e	6km	f	2km

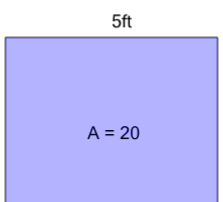
5



Find the missing side length of this rectangle

a	7in	b	6in
c	5in	d	2in
e	15in	f	8in

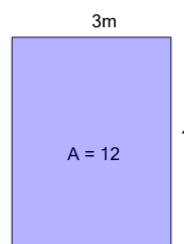
6



Find the missing side length of this rectangle

a	8ft	b	9ft
c	2ft	d	5ft
e	4ft	f	10ft

7



Find the missing side length of this rectangle

a	6m	b	5m
c	4m	d	12m
e	3m	f	7m