



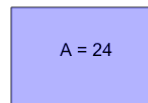
Math worksheet on 'Area of a Rectangle - Tile Coverage from Area vs Length and Width (Level 1)'.
Part of a broader unit on 'Area and Perimeter Logic - Practice'

Learn online:

app.mobius.academy/math/units/area_and_perimeter_geometry_logic_practice/

1

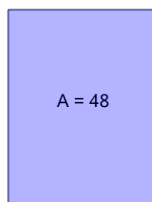
How many of the smaller tiles will it take to cover the larger area?



a	6	b	5
c	11	d	1
e	8	f	4

2


How many of the smaller tiles will it take to cover the larger area?



a	11	b	16
c	5	d	12
e	20	f	15

3

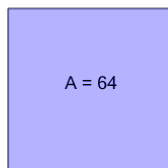
How many of the smaller tiles will it take to cover the larger area?



a	12	b	16
c	18	d	17
e	8	f	15

4

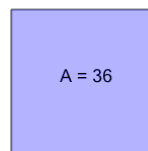
How many of the smaller tiles will it take to cover the larger area?



a	23	b	16
c	11	d	15
e	10	f	7

5

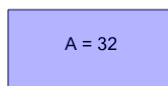
How many of the smaller tiles will it take to cover the larger area?



a	14	b	3
c	9	d	8
e	12	f	4

6

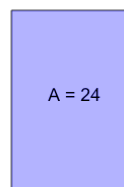
How many of the smaller tiles will it take to cover the larger area?



a	2	b	4
c	5	d	3
e	17	f	8

7

How many of the smaller tiles will it take to cover the larger area?



a	6	b	3
c	2	d	12
e	10	f	4