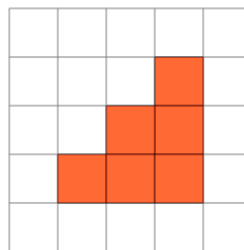




Math worksheet on 'Area of a Shape on a Grid - Irregular Shape to Area (Level 1)'. Part of a broader unit on 'Area Intro'

Learn online: [app.mobius.academy/math/units/area\\_intro/](http://app.mobius.academy/math/units/area_intro/)

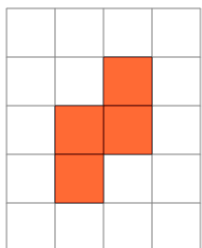
1



Find the area of the shape on this grid of 1x1 squares

<b>a</b>	4	<b>b</b>	15
<b>c</b>	1	<b>d</b>	14
<b>e</b>	9	<b>f</b>	6

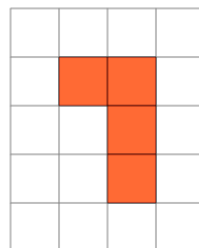
2



Find the area of the shape on this grid of 1x1 squares

<b>a</b>	3	<b>b</b>	11
<b>c</b>	9	<b>d</b>	1
<b>e</b>	4	<b>f</b>	2

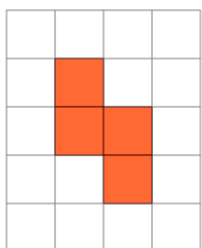
3



Find the area of the shape on this grid of 1x1 squares

<b>a</b>	4	<b>b</b>	8
<b>c</b>	6	<b>d</b>	1
<b>e</b>	2	<b>f</b>	3

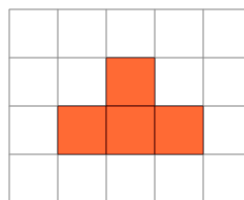
4



Find the area of the shape on this grid of 1x1 squares

<b>a</b>	2	<b>b</b>	13
<b>c</b>	5	<b>d</b>	10
<b>e</b>	4	<b>f</b>	6

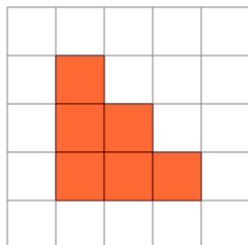
5



Find the area of the shape on this grid of 1x1 squares

<b>a</b>	1	<b>b</b>	4
<b>c</b>	9	<b>d</b>	5
<b>e</b>	3	<b>f</b>	2

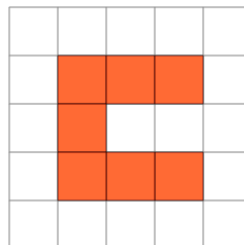
6



Find the area of the shape on this grid of 1x1 squares

<b>a</b>	6	<b>b</b>	11
<b>c</b>	14	<b>d</b>	4
<b>e</b>	2	<b>f</b>	3

7



Find the area of the shape on this grid of 1x1 squares

<b>a</b>	7	<b>b</b>	2
<b>c</b>	14	<b>d</b>	13
<b>e</b>	8	<b>f</b>	4