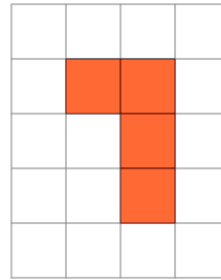




Math worksheet on 'Area of a Shape on a Grid - Irregular Shape to Area (Level 2)'. Part of a broader unit on 'Area Intro'

Learn online: app.mobius.academy/math/units/area_intro/

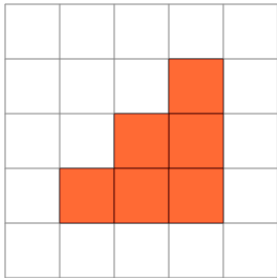
1



Find the area of the shape on this grid of 1x1 squares

a	6	b	7
c	11	d	4
e	9	f	8

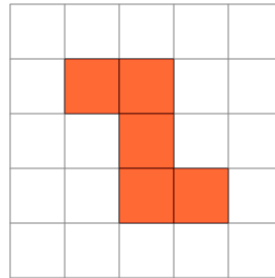
2



Find the area of the shape on this grid of 1x1 squares

a	14	b	6
c	2	d	8
e	1	f	11

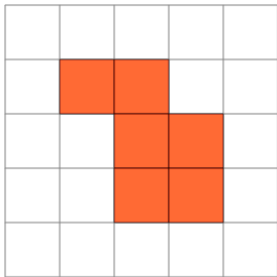
3



Find the area of the shape on this grid of 1x1 squares

a	14	b	8
c	1	d	5
e	2	f	4

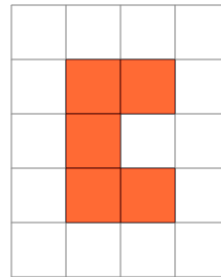
4



Find the area of the shape on this grid of 1x1 squares

a	2	b	5
c	11	d	12
e	6	f	1

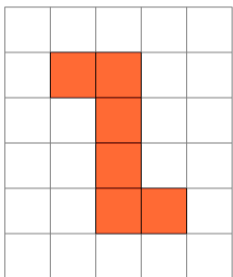
5



Find the area of the shape on this grid of 1x1 squares

a	1	b	3
c	11	d	4
e	5	f	7

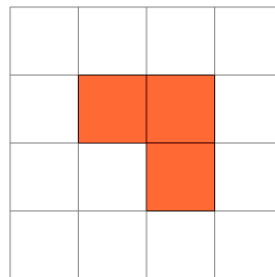
6



Find the area of the shape on this grid of 1x1 squares

a	14	b	6
c	1	d	12
e	3	f	8

7



Find the area of the shape on this grid of 1x1 squares

a	11	b	4
c	6	d	2
e	5	f	3