



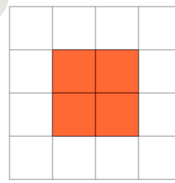
Math worksheet on 'Area of a Shape on a Grid - Area to Rectangle Shape (Level 1)'. Part of a broader unit on 'Area Intro'

Learn online: [app.mobius.academy/math/units/area\\_intro/](http://app.mobius.academy/math/units/area_intro/)

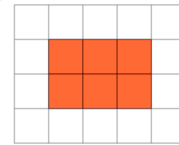
1

Find the shape that has an area of 4 on the grid of 1x1 squares

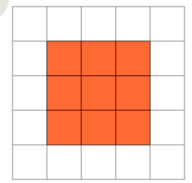
a



b



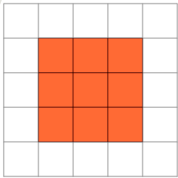
c



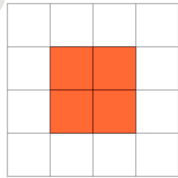
2

Find the shape that has an area of 9 on the grid of 1x1 squares

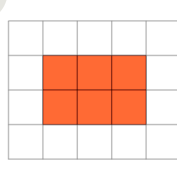
a



b



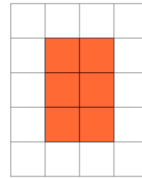
c



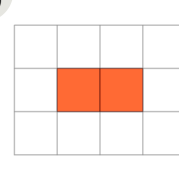
3

Find the shape that has an area of 2 on the grid of 1x1 squares

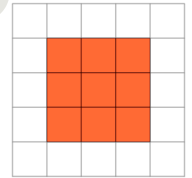
a



b



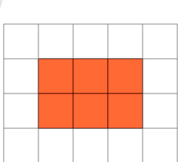
c



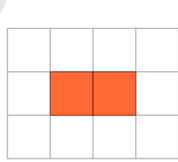
4

Find the shape that has an area of 6 on the grid of 1x1 squares

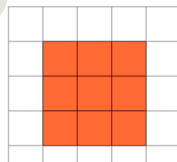
a



b



c



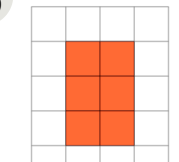
5

Find the shape that has an area of 6 on the grid of 1x1 squares

a



b



c

