



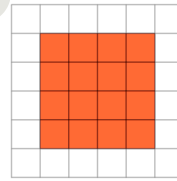
Math worksheet on 'Area of a Shape on a Grid - Area to Rectangle Shape (Level 2)'. Part of a broader unit on 'Area Intro'

Learn online: app.mobius.academy/math/units/area_intro/

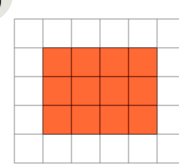
1

Find the shape that has an area of 16 on the grid of 1x1 squares

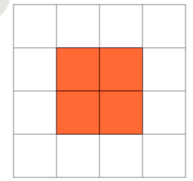
a



b



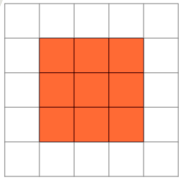
c



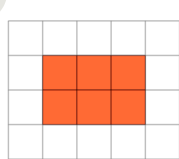
2

Find the shape that has an area of 8 on the grid of 1x1 squares

a



b



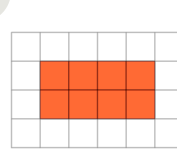
c



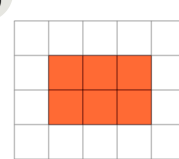
3

Find the shape that has an area of 6 on the grid of 1x1 squares

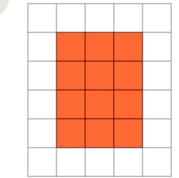
a



b



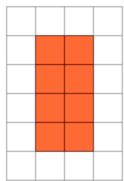
c



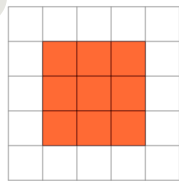
4

Find the shape that has an area of 12 on the grid of 1x1 squares

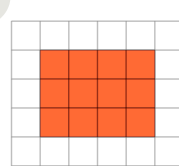
a



b



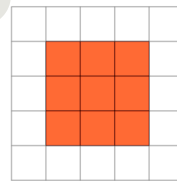
c



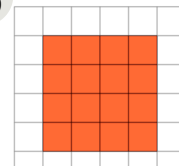
5

Find the shape that has an area of 9 on the grid of 1x1 squares

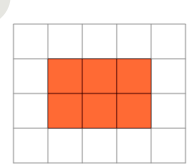
a



b



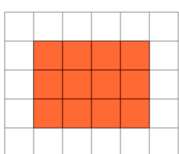
c




6

Find the shape that has an area of 6 on the grid of 1x1 squares

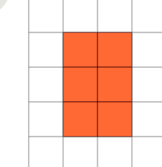
a



b



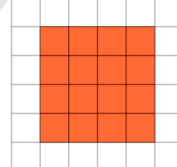
c



7

Find the shape that has an area of 4 on the grid of 1x1 squares

a



b



c

