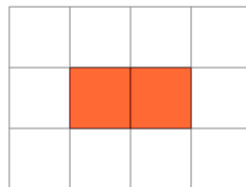




Math worksheet on 'Area of a Shape on a Grid - Rectangle Shape to Area (Level 1)'. Part of a broader unit on 'Area Intro'

Learn online: app.mobius.academy/math/units/area_intro/

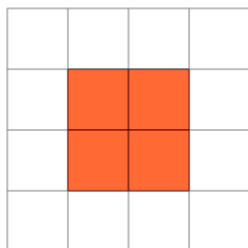
1



Find the area of the shape on this grid of 1x1 squares

a	6	b	8
c	7	d	1
e	2	f	5

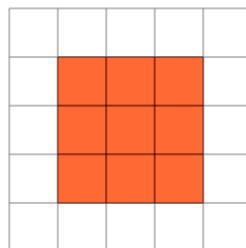
2



Find the area of the shape on this grid of 1x1 squares

a	6	b	1
c	2	d	7
e	9	f	4

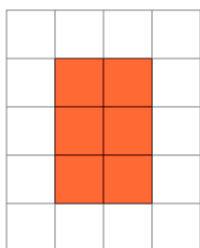
3



Find the area of the shape on this grid of 1x1 squares

a	9	b	16
c	1	d	10
e	12	f	17

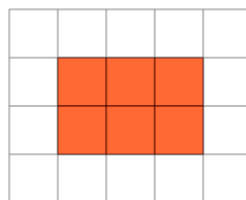
4



Find the area of the shape on this grid of 1x1 squares

a	4	b	2
c	13	d	6
e	14	f	5

5



Find the area of the shape on this grid of 1x1 squares

a	5	b	11
c	1	d	4
e	2	f	6