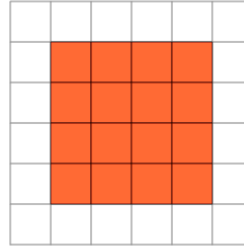




Math worksheet on 'Area of a Shape on a Grid - Rectangle Shape to Area (Level 2)'. Part of a broader unit on 'Area Intro'

Learn online: app.mobius.academy/math/units/area_intro/

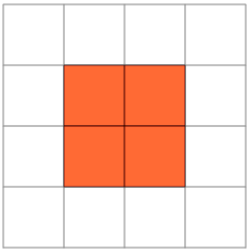
1



Find the area of the shape on this grid of 1x1 squares

a	9	b	10
c	12	d	21
e	16	f	17

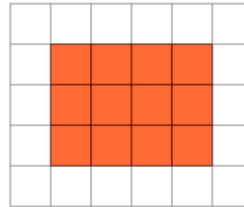
2



Find the area of the shape on this grid of 1x1 squares

a	6	b	12
c	4	d	5
e	7	f	11

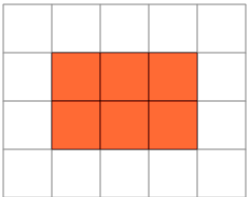
3



Find the area of the shape on this grid of 1x1 squares

a	18	b	7
c	12	d	5
e	14	f	15

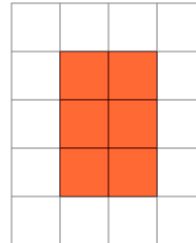
4



Find the area of the shape on this grid of 1x1 squares

a	5	b	2
c	15	d	1
e	9	f	6

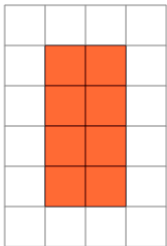
5



Find the area of the shape on this grid of 1x1 squares

a	4	b	6
c	2	d	10
e	3	f	7

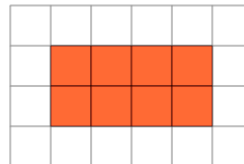
6



Find the area of the shape on this grid of 1x1 squares

a	15	b	4
c	2	d	14
e	5	f	8

7



Find the area of the shape on this grid of 1x1 squares

a	6	b	1
c	8	d	9
e	14	f	15