

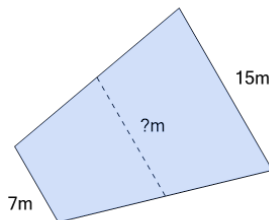


Math worksheet on 'Area of a Trapezoid Setup - Average of Uneven Sides (Level 3)'. Part of a broader unit on 'Area Practice'

Learn online: app.mobius.academy/math/units/area_practice/

1

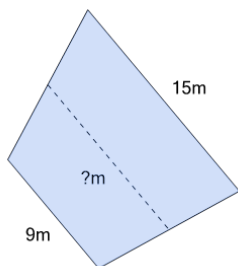
Find the average length of the trapezoid



a	5.5m	b	11m
c	3.5m	d	8.5m
e	5m		

2

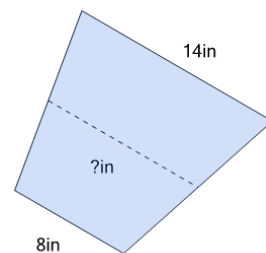
Find the average length of the trapezoid



a	11.5m	b	12m
c	5.5m	d	15.5m
e	12.5m		

3

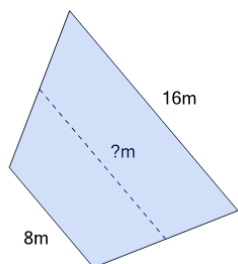
Find the average length of the trapezoid



a	11in	b	9in
c	10.5in	d	4.5in

4

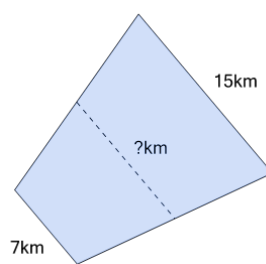
Find the average length of the trapezoid



a	12m	b	11.5m
c	5.5m	d	4m

5

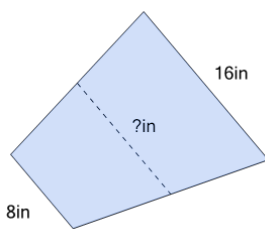
Find the average length of the trapezoid



a	12km	b	11km
c	4km	d	7.5km
e	3.5km		

6

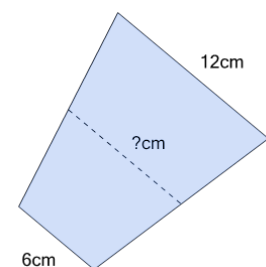
Find the average length of the trapezoid



a	12in	b	7in
c	8in	d	6.5in
e	4.5in		

7

Find the average length of the trapezoid



a	3.5cm	b	9.5cm
c	9cm	d	4cm