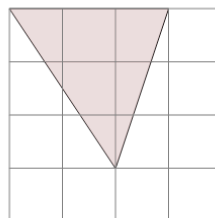




Math worksheet on 'Area of an Acute Triangle - On Grid - Image to Area (Level 1)'. Part of a broader unit on 'Triangle Area - Intro'

Learn online: [app.mobius.academy/math/units/triangle\\_area\\_intro/](http://app.mobius.academy/math/units/triangle_area_intro/)

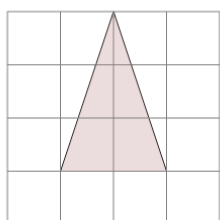
1



Find the area of the triangle on this grid of 1x1 squares

<b>a</b>	6.5	<b>b</b>	4.5
<b>c</b>	2.5	<b>d</b>	3
<b>e</b>	8.5	<b>f</b>	5

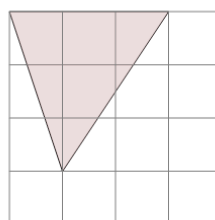
2



Find the area of the triangle on this grid of 1x1 squares

<b>a</b>	1	<b>b</b>	2.5
<b>c</b>	0.5	<b>d</b>	3
<b>e</b>	7	<b>f</b>	5

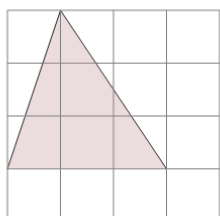
3



Find the area of the triangle on this grid of 1x1 squares

<b>a</b>	7	<b>b</b>	3
<b>c</b>	1.5	<b>d</b>	8.5
<b>e</b>	4.5	<b>f</b>	8

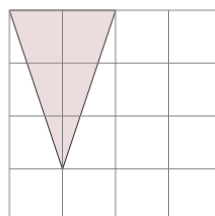
4



Find the area of the triangle on this grid of 1x1 squares

<b>a</b>	1.5	<b>b</b>	1
<b>c</b>	0.5	<b>d</b>	4.5
<b>e</b>	2.5	<b>f</b>	8

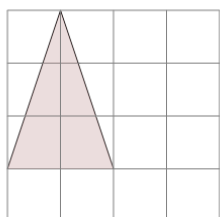
5



Find the area of the triangle on this grid of 1x1 squares

<b>a</b>	5	<b>b</b>	3
<b>c</b>	4	<b>d</b>	1
<b>e</b>	0.5	<b>f</b>	2

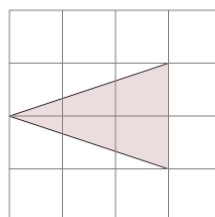
6



Find the area of the triangle on this grid of 1x1 squares

<b>a</b>	2	<b>b</b>	0.5
<b>c</b>	3	<b>d</b>	5.5
<b>e</b>	1.5	<b>f</b>	7

7



Find the area of the triangle on this grid of 1x1 squares

<b>a</b>	3.5	<b>b</b>	6.5
<b>c</b>	1.5	<b>d</b>	5.5
<b>e</b>	2.5	<b>f</b>	3