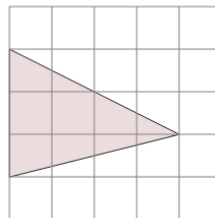




Math worksheet on 'Area of an Acute Triangle - On Grid - Image to Area (Level 2)'. Part of a broader unit on 'Triangle Area - Intro'

Learn online: app.mobius.academy/math/units/triangle_area_intro/

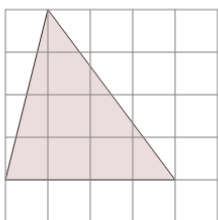
1



Find the area of the triangle on this grid of 1x1 squares

a	6	b	7
c	1	d	2
e	9	f	4

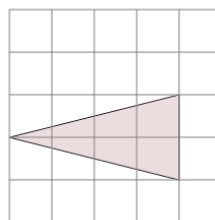
2



Find the area of the triangle on this grid of 1x1 squares

a	10.5	b	8
c	12	d	3.5
e	9	f	11

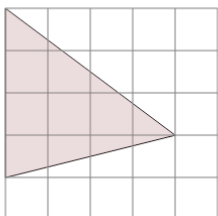
3



Find the area of the triangle on this grid of 1x1 squares

a	8	b	6
c	4	d	0.5
e	3	f	8.5

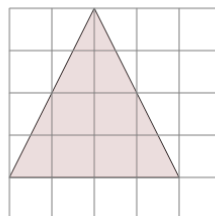
4



Find the area of the triangle on this grid of 1x1 squares

a	8.5	b	5
c	8	d	9
e	7	f	4.5

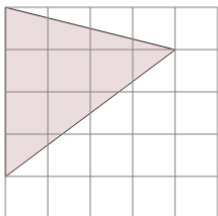
5



Find the area of the triangle on this grid of 1x1 squares

a	7	b	12
c	6	d	10
e	7.5	f	8

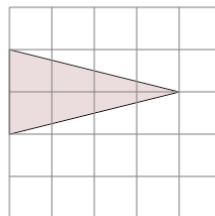
6



Find the area of the triangle on this grid of 1x1 squares

a	8	b	9.5
c	11	d	4
e	6.5	f	9

7



Find the area of the triangle on this grid of 1x1 squares

a	0.5	b	7
c	4	d	8.5
e	6.5	f	2.5