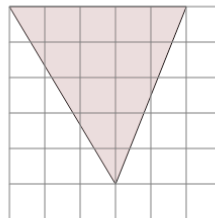




Math worksheet on 'Area of an Acute Triangle - On Grid - Image to Area (Level 3)'. Part of a broader unit on 'Triangle Area - Practice'

Learn online: app.mobius.academy/math/units/triangle_area_practice/

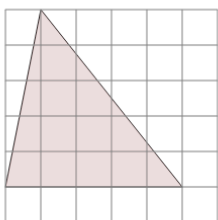
1



Find the area of the triangle on this grid of 1x1 squares

a	11.5	b	2.5
c	4.5	d	14.5
e	15.5	f	12.5

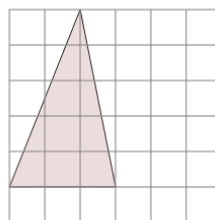
2



Find the area of the triangle on this grid of 1x1 squares

a	21.5	b	2.5
c	5.5	d	8.5
e	12.5	f	6.5

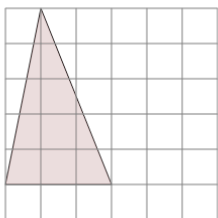
3



Find the area of the triangle on this grid of 1x1 squares

a	3	b	5.5
c	4	d	11
e	9	f	7.5

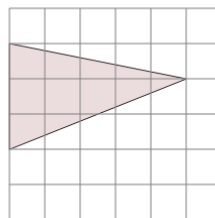
4



Find the area of the triangle on this grid of 1x1 squares

a	11	b	8.5
c	7.5	d	3
e	9.5	f	10.5

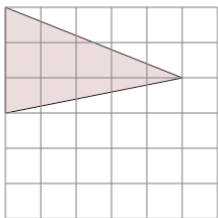
5



Find the area of the triangle on this grid of 1x1 squares

a	10	b	7.5
c	8	d	3
e	10.5	f	6.5

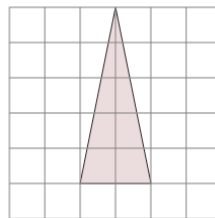
6



Find the area of the triangle on this grid of 1x1 squares

a	10.5	b	5.5
c	11.5	d	2.5
e	4	f	7.5

7



Find the area of the triangle on this grid of 1x1 squares

a	5	b	1.5
c	9.5	d	9
e	8	f	4