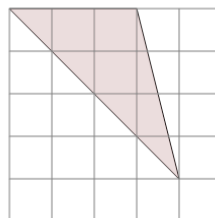




Math worksheet on 'Area of an Obtuse Triangle - On Grid - Image to Area (Level 2)'. Part of a broader unit on 'Triangle Area - Advanced'

Learn online: app.mobius.academy/math/units/triangle_area_advanced/

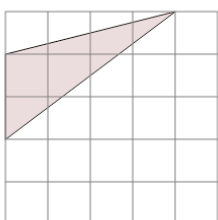
1



Find the area of the triangle on this grid of 1x1 squares

a	3.5	b	5.5
c	7	d	2.5
e	6	f	4

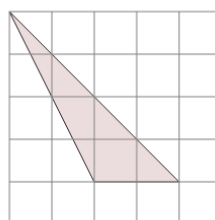
2



Find the area of the triangle on this grid of 1x1 squares

a	4.5	b	1.5
c	2.5	d	5.5
e	4	f	7.5

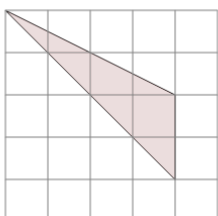
3



Find the area of the triangle on this grid of 1x1 squares

a	4	b	1.5
c	7.5	d	4.5
e	1	f	7

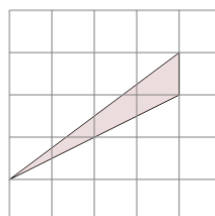
4



Find the area of the triangle on this grid of 1x1 squares

a	4	b	8
c	2	d	5.5
e	6	f	5

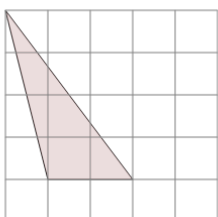
5



Find the area of the triangle on this grid of 1x1 squares

a	2.5	b	1.5
c	1	d	0.5
e	3.5	f	2

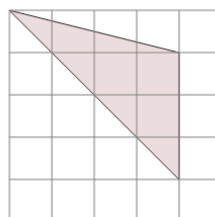
6



Find the area of the triangle on this grid of 1x1 squares

a	4	b	2
c	4.5	d	8
e	1.5	f	7

7



Find the area of the triangle on this grid of 1x1 squares

a	7	b	6.5
c	4.5	d	4
e	5	f	6