

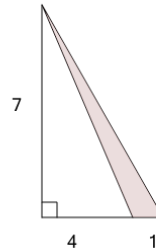


Math worksheet on 'Area of an Obtuse Triangle - Section of Right Triangle With Extra Dimensions (Level 1)'. Part of a broader unit on 'Triangle Area - Intro'

Learn online: app.mobius.academy/math/units/triangle_area_intro/

1

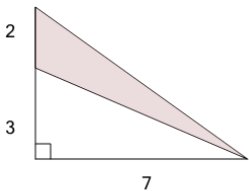
Find the area of the shaded triangle section



a	5.5	b	14
c	7	d	3.5
e	17.5	f	10.5

2

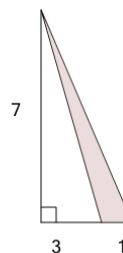
Find the area of the shaded triangle section



a	7	b	9.5
c	17.5	d	10.5
e	3.5	f	7.5

3

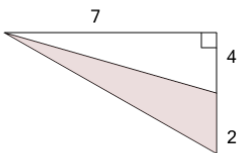
Find the area of the shaded triangle section



a	3.5	b	5
c	14	d	7
e	7.5	f	10.5

4

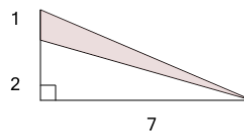
Find the area of the shaded triangle section



a	21	b	8
c	14	d	9.5
e	11.5	f	7

5

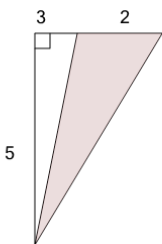
Find the area of the shaded triangle section



a	0.5	b	3.5
c	1	d	10.5
e	6	f	7

6

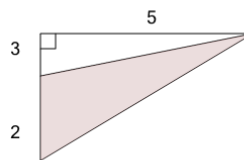
Find the area of the shaded triangle section



a	7.5	b	8
c	12.5	d	7
e	2.5	f	5

7

Find the area of the shaded triangle section



a	2.5	b	12.5
c	5	d	6.5
e	7.5	f	4