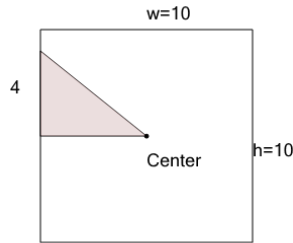




Math worksheet on 'Area of a Right Triangle - Center of Rectangle (from Dimensions) (Level 2)'. Part of a broader unit on 'Triangle Area - Advanced'

Learn online: app.mobius.academy/math/units/triangle_area_advanced/

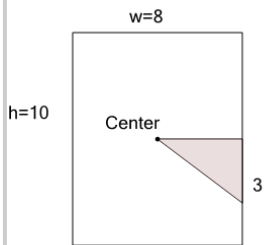
1



Find the area of the shaded triangle section

a	19	b	20
c	50	d	11
e	10	f	2

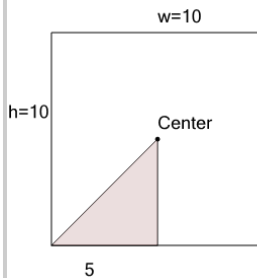
2



Find the area of the shaded triangle section

a	2.5	b	6
c	1	d	15
e	40	f	12

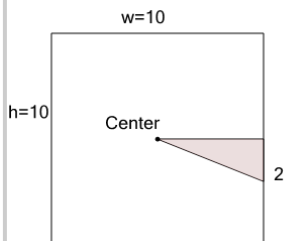
3



Find the area of the shaded triangle section

a	50	b	8.5
c	13.5	d	12.5
e	25	f	9.5

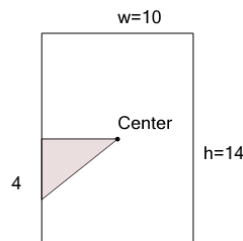
4



Find the area of the shaded triangle section

a	2.5	b	5
c	50	d	7
e	1.5	f	10

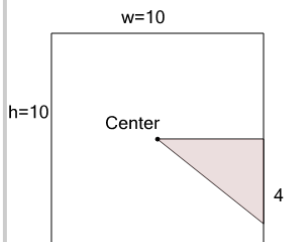
5



Find the area of the shaded triangle section

a	5	b	70
c	20	d	28
e	4	f	10

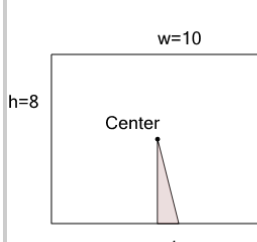
6



Find the area of the shaded triangle section

a	50	b	10
c	15	d	6
e	20	f	11

7



Find the area of the shaded triangle section

a	2	b	4
c	3.5	d	1.5
e	5	f	40