

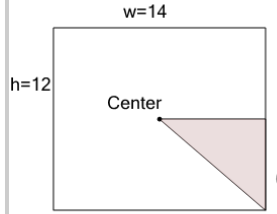


Math worksheet on 'Area of a Right Triangle - Center of Rectangle (from Dimensions) (Level 3)'. Part of a broader unit on 'Area and Perimeter Complex Shapes'

Learn online:

app.mobius.academy/math/units/area_and_perimeter_complex_shapes/

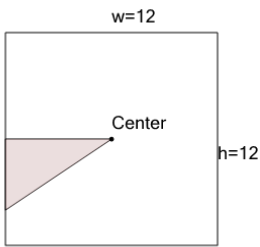
1



Find the area of the shaded triangle section

a	15	b	42
c	84	d	31
e	21	f	36

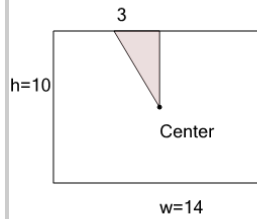
2



Find the area of the shaded triangle section

a	24	b	12
c	72	d	7
e	18	f	16

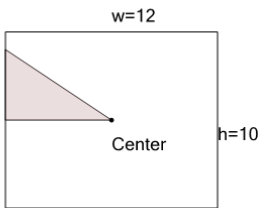
3



Find the area of the shaded triangle section

a	15	b	7
c	2.5	d	70
e	7.5	f	21

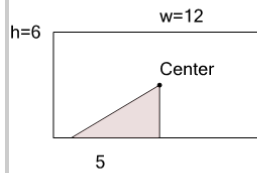
4



Find the area of the shaded triangle section

a	24	b	18
c	14	d	60
e	12	f	20

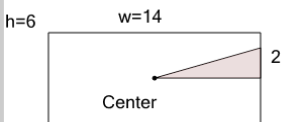
5



Find the area of the shaded triangle section

a	36	b	15
c	3.5	d	7.5
e	30	f	6.5

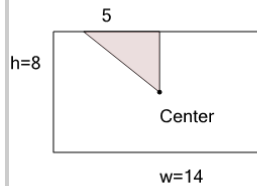
6



Find the area of the shaded triangle section

a	14	b	7
c	42	d	11
e	6	f	10

7



Find the area of the shaded triangle section

a	35	b	10
c	14	d	20
e	5	f	56