

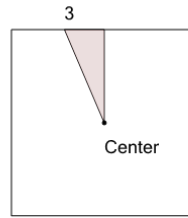


Math worksheet on 'Area of a Right Triangle - Center of Square (from Area) (Level 3)'. Part of a broader unit on 'Area and Perimeter Complex Shapes'

Learn online:

app.mobius.academy/math/units/area_and_perimeter_complex_shapes/

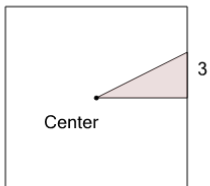
1



Find the area of the shaded triangle section within the square

a	13.5	b	10.5
c	98	d	7.5
e	21	f	9.5

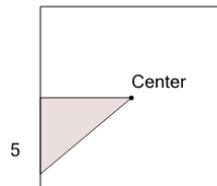
2



Find the area of the shaded triangle section within the square

a	18	b	9
c	10.5	d	7
e	72	f	13.5

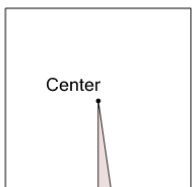
3



Find the area of the shaded triangle section within the square

a	72	b	15
c	18	d	9
e	30	f	22.5

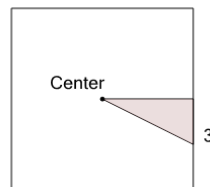
4



Find the area of the shaded triangle section within the square

a	1	b	98
c	8	d	2.5
e	3.5	f	7

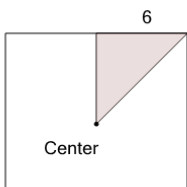
5



Find the area of the shaded triangle section within the square

a	18	b	5
c	9	d	6
e	8.5	f	72

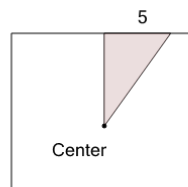
6



Find the area of the shaded triangle section within the square

a	3	b	72
c	18	d	36
e	30	f	13.5

7



Find the area of the shaded triangle section within the square

a	29.5	b	35
c	31	d	17.5
e	20.5	f	98