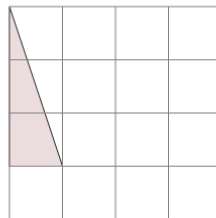




Math worksheet on 'Area of a Right Triangle - On Grid - Image to Area (Level 1)'. Part of a broader unit on 'Triangle Area - Advanced'

Learn online: [app.mobius.academy/math/units/triangle\\_area\\_advanced/](http://app.mobius.academy/math/units/triangle_area_advanced/)

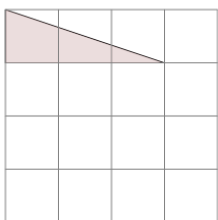
1



Find the area of the triangle on this grid of 1x1 squares

<b>a</b>	2.5	<b>b</b>	6
<b>c</b>	1	<b>d</b>	0.5
<b>e</b>	5	<b>f</b>	1.5

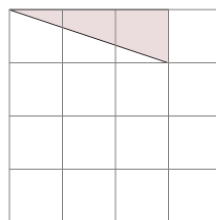
2



Find the area of the triangle on this grid of 1x1 squares

<b>a</b>	3.5	<b>b</b>	2
<b>c</b>	3	<b>d</b>	0.5
<b>e</b>	1	<b>f</b>	1.5

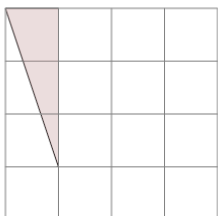
3



Find the area of the triangle on this grid of 1x1 squares

<b>a</b>	5.5	<b>b</b>	4
<b>c</b>	1	<b>d</b>	1.5
<b>e</b>	3	<b>f</b>	0.5

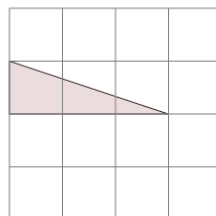
4



Find the area of the triangle on this grid of 1x1 squares

<b>a</b>	1.5	<b>b</b>	0.5
<b>c</b>	4	<b>d</b>	3
<b>e</b>	3.5	<b>f</b>	4.5

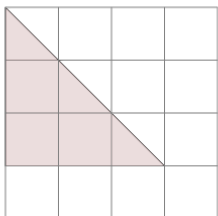
5



Find the area of the triangle on this grid of 1x1 squares

<b>a</b>	3	<b>b</b>	1
<b>c</b>	2	<b>d</b>	1.5
<b>e</b>	3.5	<b>f</b>	6

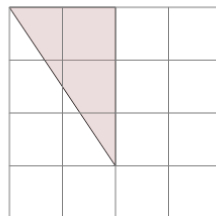
6



Find the area of the triangle on this grid of 1x1 squares

<b>a</b>	0.5	<b>b</b>	7
<b>c</b>	4.5	<b>d</b>	3
<b>e</b>	7.5	<b>f</b>	3.5

7



Find the area of the triangle on this grid of 1x1 squares

<b>a</b>	0.5	<b>b</b>	7.5
<b>c</b>	3	<b>d</b>	7
<b>e</b>	6.5	<b>f</b>	6