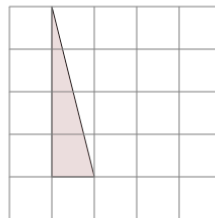




Math worksheet on 'Area of a Right Triangle - On Grid - Image to Area (Level 2)'. Part of a broader unit on 'Triangle Area - Intro'

Learn online: app.mobius.academy/math/units/triangle_area_intro/

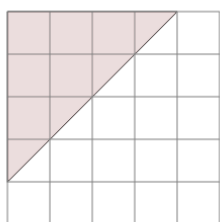
1



Find the area of the triangle on this grid of 1x1 squares

a	3	b	6
c	2	d	1
e	0.5	f	2.5

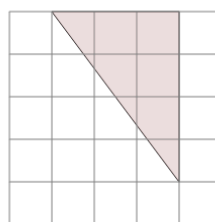
2



Find the area of the triangle on this grid of 1x1 squares

a	9	b	8
c	3	d	6.5
e	9.5	f	7

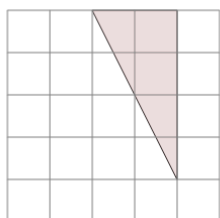
3



Find the area of the triangle on this grid of 1x1 squares

a	9	b	10
c	6	d	7.5
e	5.5	f	2.5

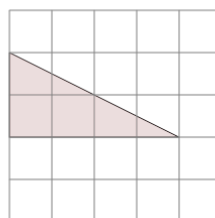
4



Find the area of the triangle on this grid of 1x1 squares

a	2.5	b	1
c	5.5	d	8
e	6	f	4

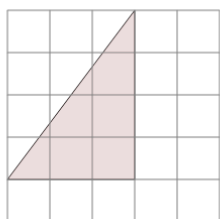
5



Find the area of the triangle on this grid of 1x1 squares

a	0.5	b	5
c	8.5	d	7
e	7.5	f	4

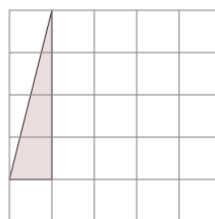
6



Find the area of the triangle on this grid of 1x1 squares

a	8.5	b	2
c	3	d	5
e	6	f	6.5

7



Find the area of the triangle on this grid of 1x1 squares

a	2.5	b	2
c	6	d	3
e	5	f	0.5