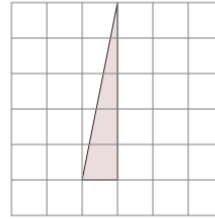




Math worksheet on 'Area of a Right Triangle - On Grid - Image to Area (Level 3)'. Part of a broader unit on 'Triangle Area - Intro'

Learn online: [app.mobius.academy/math/units/triangle\\_area\\_intro/](http://app.mobius.academy/math/units/triangle_area_intro/)

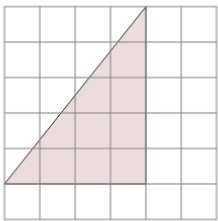
1



Find the area of the triangle on this grid of 1x1 squares

<b>a</b>	5	<b>b</b>	0.5
<b>c</b>	3	<b>d</b>	2.5
<b>e</b>	6.5	<b>f</b>	1

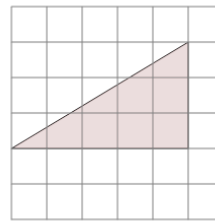
2



Find the area of the triangle on this grid of 1x1 squares

<b>a</b>	19	<b>b</b>	17
<b>c</b>	10	<b>d</b>	6
<b>e</b>	7	<b>f</b>	12

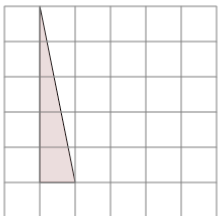
3



Find the area of the triangle on this grid of 1x1 squares

<b>a</b>	7.5	<b>b</b>	10.5
<b>c</b>	7	<b>d</b>	9
<b>e</b>	10	<b>f</b>	4.5

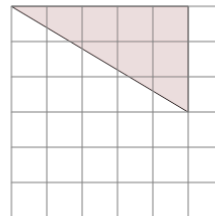
4



Find the area of the triangle on this grid of 1x1 squares

<b>a</b>	1	<b>b</b>	5
<b>c</b>	3.5	<b>d</b>	2.5
<b>e</b>	0.5	<b>f</b>	4.5

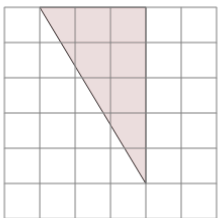
5



Find the area of the triangle on this grid of 1x1 squares

<b>a</b>	8.5	<b>b</b>	5
<b>c</b>	11.5	<b>d</b>	7
<b>e</b>	7.5	<b>f</b>	11

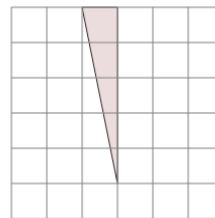
6



Find the area of the triangle on this grid of 1x1 squares

<b>a</b>	7.5	<b>b</b>	10
<b>c</b>	5	<b>d</b>	8.5
<b>e</b>	10.5	<b>f</b>	8

7



Find the area of the triangle on this grid of 1x1 squares

<b>a</b>	4	<b>b</b>	2
<b>c</b>	4.5	<b>d</b>	6.5
<b>e</b>	1.5	<b>f</b>	2.5