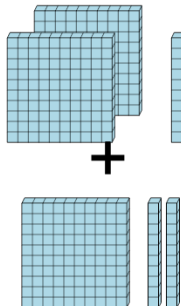




Math worksheet on 'Base 10 Blocks - Adding - Picture to Equation, No Carry - Hundreds and Tens (Level 1)'. Part of a broader unit on 'Ten Groups - Adding'

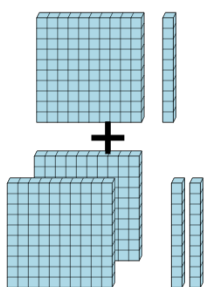
Learn online: [app.mobius.academy/math/units/ten\\_groups\\_addition\\_intro/](http://app.mobius.academy/math/units/ten_groups_addition_intro/)

**1** Choose the addition sentence for the blocks



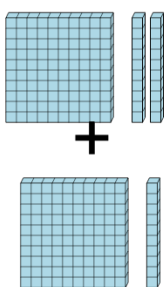
<b>a</b>	$210 + 116$	<b>b</b>	$214 + 120$
<b>c</b>	$210 + 120$	<b>d</b>	$210 + 116$
<b>e</b>	$206 + 120$	<b>f</b>	$212 + 120$

**2** Choose the addition sentence for the blocks



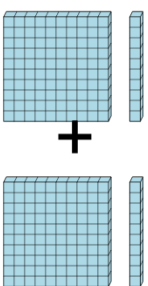
<b>a</b>	$110 + 221$	<b>b</b>	$110 + 221$
<b>c</b>	$105 + 220$	<b>d</b>	$110 + 220$
<b>e</b>	$110 + 216$	<b>f</b>	$111 + 220$

**3** Choose the addition sentence for the blocks



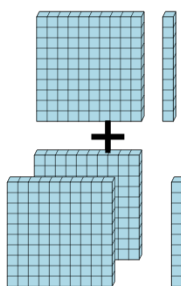
<b>a</b>	$120 + 111$	<b>b</b>	$116 + 110$
<b>c</b>	$120 + 108$	<b>d</b>	$119 + 110$
<b>e</b>	$120 + 110$	<b>f</b>	$120 + 114$

**4** Choose the addition sentence for the blocks



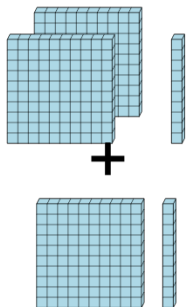
<b>a</b>	$110 + 110$	<b>b</b>	$110 + 107$
<b>c</b>	$110 + 114$	<b>d</b>	$110 + 109$
<b>e</b>	$110 + 106$	<b>f</b>	$110 + 114$

**5** Choose the addition sentence for the blocks



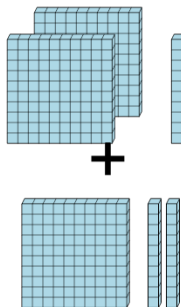
<b>a</b>	$111 + 210$	<b>b</b>	$111 + 210$
<b>c</b>	$106 + 210$	<b>d</b>	$110 + 210$
<b>e</b>	$110 + 205$	<b>f</b>	$105 + 210$

**6** Choose the addition sentence for the blocks



<b>a</b>	$214 + 110$	<b>b</b>	$210 + 112$
<b>c</b>	$213 + 110$	<b>d</b>	$205 + 110$
<b>e</b>	$210 + 114$	<b>f</b>	$210 + 110$

**7** Choose the addition sentence for the blocks



<b>a</b>	$210 + 124$	<b>b</b>	$213 + 120$
<b>c</b>	$206 + 120$	<b>d</b>	$210 + 123$
<b>e</b>	$205 + 120$	<b>f</b>	$210 + 120$