

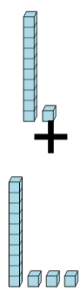


Math worksheet on 'Base 10 Blocks - Adding - Picture to Equation, No Carry - Tens and Ones (Level 1)'. Part of a broader unit on 'Addition and Subtraction of Integers - 1 and 2 Digit'

Learn online:

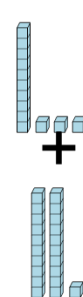
[app.mobius.academy/math/units/addition\\_and\\_subtraction\\_integers\\_1\\_and\\_2\\_digit/](http://app.mobius.academy/math/units/addition_and_subtraction_integers_1_and_2_digit/)

**1** Choose the addition sentence for the blocks



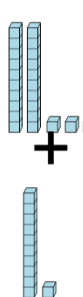
<b>a</b> 11 + 14	<b>b</b> 11 + 17
<b>c</b> 11 + 13	<b>d</b> 6 + 13
<b>e</b> 10 + 13	<b>f</b> 11 + 9

**2** Choose the addition sentence for the blocks



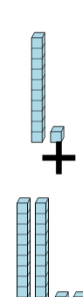
<b>a</b> 13 + 24	<b>b</b> 13 + 17
<b>c</b> 13 + 18	<b>d</b> 13 + 21
<b>e</b> 13 + 17	<b>f</b> 8 + 21

**3** Choose the addition sentence for the blocks



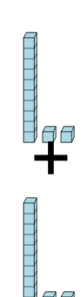
<b>a</b> 24 + 11	<b>b</b> 23 + 15
<b>c</b> 23 + 14	<b>d</b> 23 + 11
<b>e</b> 23 + 7	<b>f</b> 23 + 6

**4** Choose the addition sentence for the blocks



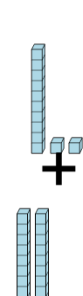
<b>a</b> 11 + 23	<b>b</b> 12 + 23
<b>c</b> 12 + 23	<b>d</b> 11 + 26
<b>e</b> 11 + 19	<b>f</b> 12 + 23

**5** Choose the addition sentence for the blocks



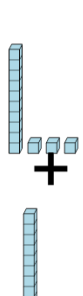
<b>a</b> 12 + 12	<b>b</b> 12 + 15
<b>c</b> 12 + 8	<b>d</b> 13 + 12
<b>e</b> 12 + 13	<b>f</b> 9 + 12

**6** Choose the addition sentence for the blocks



<b>a</b> 12 + 17	<b>b</b> 12 + 22
<b>c</b> 12 + 19	<b>d</b> 12 + 23
<b>e</b> 12 + 26	<b>f</b> 7 + 22

**7** Choose the addition sentence for the blocks



<b>a</b> 12 + 11	<b>b</b> 13 + 15
<b>c</b> 13 + 11	<b>d</b> 13 + 10
<b>e</b> 13 + 7	<b>f</b> 14 + 11