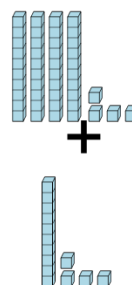




Math worksheet on 'Base 10 Blocks - Adding - Picture to Equation, No Carry - Tens and Ones (Level 2)'. Part of a broader unit on 'Ten Groups - Adding'

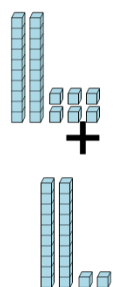
Learn online: app.mobius.academy/math/units/ten_groups_addition_intro/

1 Choose the addition sentence for the blocks



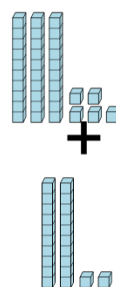
a 44 + 16	b 45 + 14
c 44 + 14	d 48 + 14
e 45 + 14	f 44 + 16

2 Choose the addition sentence for the blocks



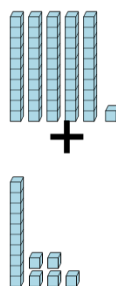
a 26 + 22	b 25 + 22
c 30 + 22	d 28 + 22
e 30 + 22	f 26 + 26

3 Choose the addition sentence for the blocks



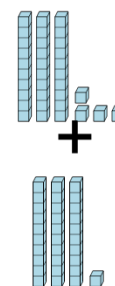
a 35 + 26	b 35 + 26
c 35 + 20	d 35 + 22
e 33 + 22	f 35 + 17

4 Choose the addition sentence for the blocks



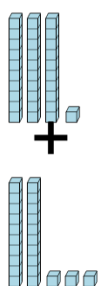
a 51 + 15	b 51 + 18
c 51 + 13	d 48 + 15
e 48 + 15	f 51 + 12

5 Choose the addition sentence for the blocks



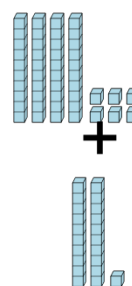
a 38 + 31	b 34 + 31
c 34 + 26	d 35 + 31
e 34 + 29	f 36 + 31

6 Choose the addition sentence for the blocks



a 31 + 18	b 30 + 23
c 31 + 23	d 27 + 23
e 31 + 26	f 31 + 20

7 Choose the addition sentence for the blocks



a 47 + 21	b 43 + 21
c 46 + 17	d 50 + 21
e 46 + 20	f 46 + 21