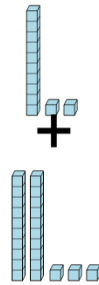




Math worksheet on 'Base 10 Blocks - Adding - Picture to Equation, With Carry - Tens and Ones (Level 1)'. Part of a broader unit on 'Ten Groups - Adding'

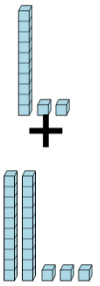
Learn online: app.mobius.academy/math/units/ten_groups_addition_intro/

1 Choose the addition sentence for the blocks



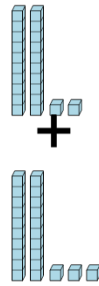
a $12 + 27$	b $7 + 23$
c $12 + 23$	d $12 + 21$
e $16 + 23$	f $9 + 23$

2 Choose the addition sentence for the blocks



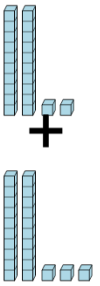
a $12 + 26$	b $8 + 23$
c $14 + 23$	d $9 + 23$
e $12 + 23$	f $12 + 25$

3 Choose the addition sentence for the blocks



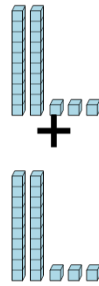
a $22 + 24$	b $22 + 26$
c $22 + 23$	d $19 + 23$
e $23 + 23$	f $25 + 23$

4 Choose the addition sentence for the blocks



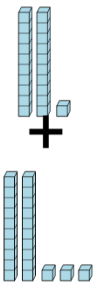
a $22 + 20$	b $25 + 23$
c $22 + 27$	d $22 + 23$
e $22 + 21$	f $23 + 23$

5 Choose the addition sentence for the blocks



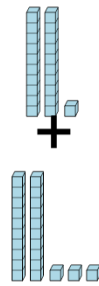
a $23 + 23$	b $25 + 23$
c $27 + 23$	d $26 + 23$
e $23 + 26$	f $18 + 23$

6 Choose the addition sentence for the blocks



a $21 + 22$	b $23 + 23$
c $21 + 23$	d $20 + 23$
e $19 + 23$	f $21 + 18$

7 Choose the addition sentence for the blocks



a $16 + 23$	b $17 + 23$
c $22 + 23$	d $16 + 23$
e $21 + 23$	f $21 + 21$