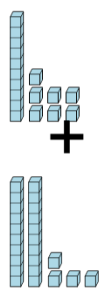




Math worksheet on 'Base 10 Blocks - Adding - Picture to Equation, With Carry - Tens and Ones (Level 2)'. Part of a broader unit on 'Ten Groups - Adding'

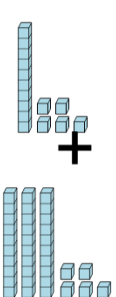
Learn online: [app.mobius.academy/math/units/ten\\_groups\\_addition\\_intro/](http://app.mobius.academy/math/units/ten_groups_addition_intro/)

**1** Choose the addition sentence for the blocks



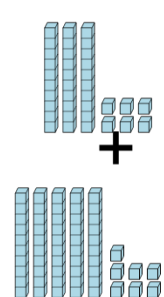
<b>a</b> 17 + 19	<b>b</b> 17 + 19
<b>c</b> 13 + 24	<b>d</b> 17 + 24
<b>e</b> 17 + 26	<b>f</b> 13 + 24

**2** Choose the addition sentence for the blocks



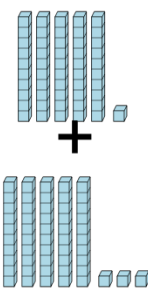
<b>a</b> 12 + 35	<b>b</b> 10 + 35
<b>c</b> 15 + 35	<b>d</b> 16 + 35
<b>e</b> 19 + 35	<b>f</b> 14 + 35

**3** Choose the addition sentence for the blocks



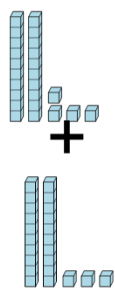
<b>a</b> 39 + 57	<b>b</b> 34 + 57
<b>c</b> 31 + 57	<b>d</b> 35 + 57
<b>e</b> 36 + 57	<b>f</b> 36 + 53

**4** Choose the addition sentence for the blocks



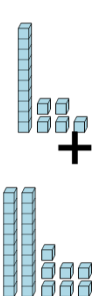
<b>a</b> 46 + 53	<b>b</b> 51 + 53
<b>c</b> 51 + 51	<b>d</b> 51 + 57
<b>e</b> 51 + 54	<b>f</b> 52 + 53

**5** Choose the addition sentence for the blocks



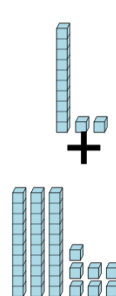
<b>a</b> 21 + 23	<b>b</b> 24 + 23
<b>c</b> 24 + 19	<b>d</b> 28 + 23
<b>e</b> 20 + 23	<b>f</b> 24 + 27

**6** Choose the addition sentence for the blocks



<b>a</b> 15 + 27	<b>b</b> 16 + 27
<b>c</b> 19 + 27	<b>d</b> 18 + 27
<b>e</b> 15 + 31	<b>f</b> 15 + 29

**7** Choose the addition sentence for the blocks



<b>a</b> 12 + 32	<b>b</b> 12 + 39
<b>c</b> 12 + 40	<b>d</b> 13 + 37
<b>e</b> 12 + 37	<b>f</b> 10 + 37