




Math worksheet on 'Base 10 Blocks - Adding - Picture to Answer, No Carry - Tens and Ones (Level 1)'. Part of a broader unit on 'Addition and Subtraction of Integers - 1 and 2 Digit'

Learn online:


app.mobius.academy/math/units/addition_and_subtraction_integers_1_and_2_digit/

1 How many blocks are there?



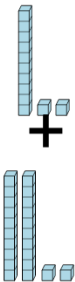
a	b	c
3011	23	319
d	e	f
131	488	12

2 How many blocks are there?



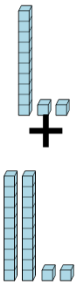
a	b	c
3016	24	4
d	e	f
2992	3022	3041

3 How many blocks are there?




a	b	c
199	16	2
d	e	f
33	34	994

4 How many blocks are there?



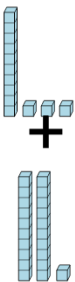
a	b	c
28	83	187
d	e	f
393	15	34

5 How many blocks are there?




a	b	c
24	3986	20
d	e	f
31	2994	22

6 How many blocks are there?



a	b	c
2	31	34
d	e	f
1	42	282

7 How many blocks are there?



a	b	c
33	50	4480
d	e	f
2613	222	20