

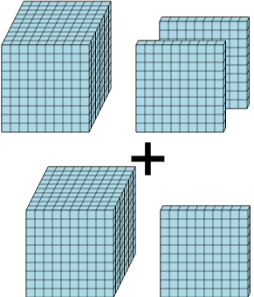


Math worksheet on 'Base 10 Blocks - Adding - Picture to Answer, No Carry - Thousands and Hundreds (Level 2)'. Part of a broader unit on 'Addition and Subtraction of Integers - 2 and 3 Digit'

Learn online:

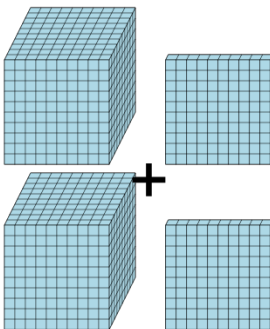
app.mobius.academy/math/units/addition_and_subtraction_integers_2_and_3_digit/

2 How many blocks are there?



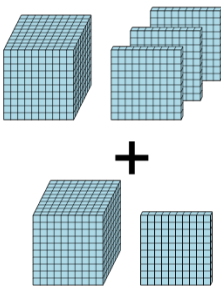
a	b	c
400	4501	2300
d	e	f
3805	2700	1200

3 How many blocks are there?



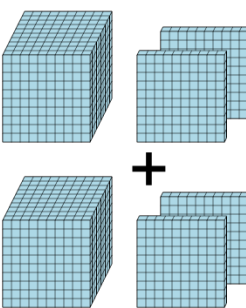
a	b	c
1700	2200	2099
d	e	f
997	0	1810

4 How many blocks are there?



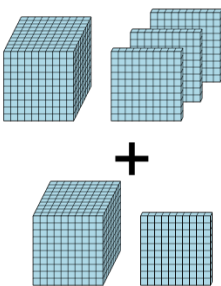
a	b	c
2400	500	2900
d	e	f
4100	0	3080

5 How many blocks are there?



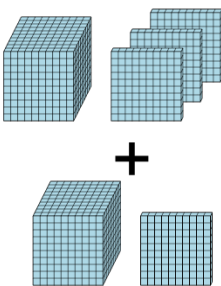
a	b	c
1216	2400	1053
d	e	f
1100	2700	2100

6 How many blocks are there?



a	b	c
2400	4000	1760
d	e	f
100	1010	3100

7 How many blocks are there?



a	b	c
1904	205	1830
d	e	f
2400	1302	2103