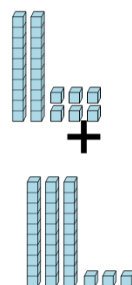




Math worksheet on 'Base 10 Blocks - Adding - Picture to Answer, With Carry - Tens and Ones (Level 2)'. Part of a broader unit on 'Ten Groups - Adding'

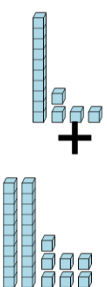
Learn online: [app.mobius.academy/math/units/ten\\_groups\\_addition\\_intro/](http://app.mobius.academy/math/units/ten_groups_addition_intro/)

**1** How many blocks are there?



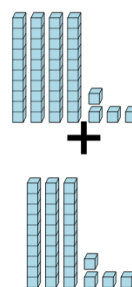
<b>a</b>	<b>b</b>	<b>c</b>
333	2	59
<b>d</b>	<b>e</b>	<b>f</b>
5021	158	196

**2** How many blocks are there?



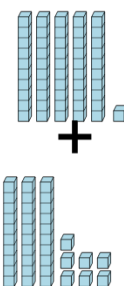
<b>a</b>	<b>b</b>	<b>c</b>
24	7	4
<b>d</b>	<b>e</b>	<b>f</b>
41	285	1893

**3** How many blocks are there?



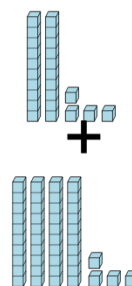
<b>a</b>	<b>b</b>	<b>c</b>
2947	22	414
<b>d</b>	<b>e</b>	<b>f</b>
78	76	41

**4** How many blocks are there?



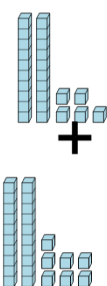
<b>a</b>	<b>b</b>	<b>c</b>
88	1056	46
<b>d</b>	<b>e</b>	<b>f</b>
110	974	2997

**5** How many blocks are there?



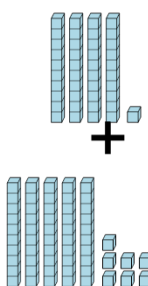
<b>a</b>	<b>b</b>	<b>c</b>
12	870	36
<b>d</b>	<b>e</b>	<b>f</b>
68	0	170

**6** How many blocks are there?



<b>a</b>	<b>b</b>	<b>c</b>
1989	1	403
<b>d</b>	<b>e</b>	<b>f</b>
52	305	38

**7** How many blocks are there?



<b>a</b>	<b>b</b>	<b>c</b>
36	74	20
<b>d</b>	<b>e</b>	<b>f</b>
3012	98	271