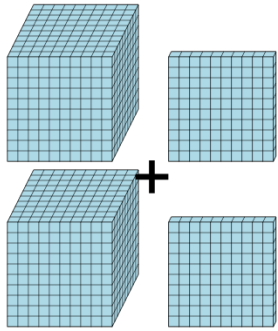




Math worksheet on 'Base 10 Blocks - Adding - Picture to Answer, With Carry - Thousands and Hundreds (Level 1)'. Part of a broader unit on 'Ten Groups - Adding'

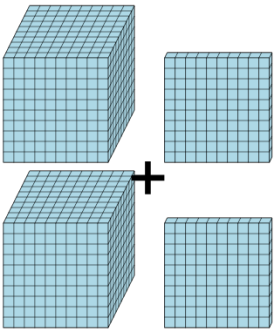
Learn online: app.mobius.academy/math/units/ten_groups_addition_intro/

1 How many blocks are there?



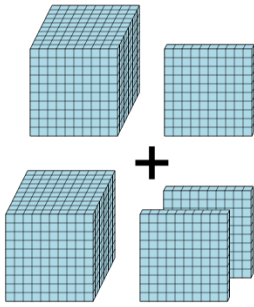
a	b	c
800	1	3060
d	e	f
2200	1010	4792

2 How many blocks are there?



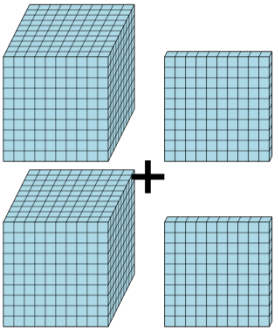
a	b	c
607	2200	3090
d	e	f
3100	3940	1100

3 How many blocks are there?



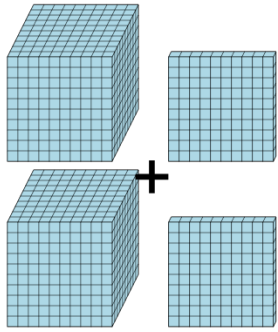
a	b	c
704	1810	2300
d	e	f
1400	200	1710

4 How many blocks are there?



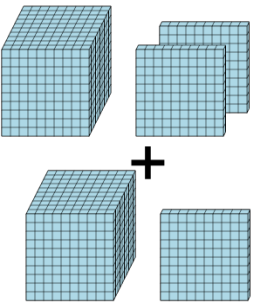
a	b	c
660	1770	804
d	e	f
2600	1580	2200

5 How many blocks are there?



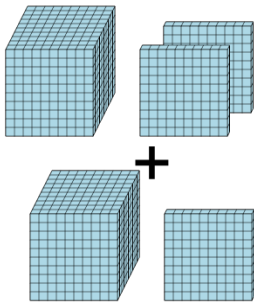
a	b	c
1200	4026	2200
d	e	f
1100	298	2800

6 How many blocks are there?



a	b	c
2100	1102	2300
d	e	f
2798	2995	770

7 How many blocks are there?



a	b	c
2300	2600	837
d	e	f
2198	2950	900