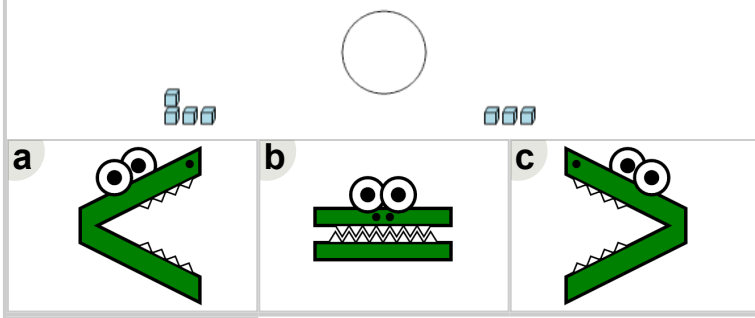




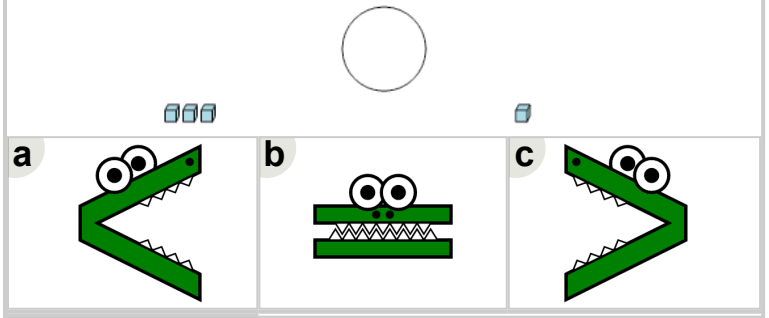
Math worksheet on 'Base 10 Blocks - Less or Greater Than - Pictures to Alligator - Ones (Level 1)'.  
Part of a broader unit on 'Ten Groups - Less Than, Greater Than'

Learn online: [app.mobius.academy/math/units/ten\\_groups\\_compare\\_intro/](http://app.mobius.academy/math/units/ten_groups_compare_intro/)

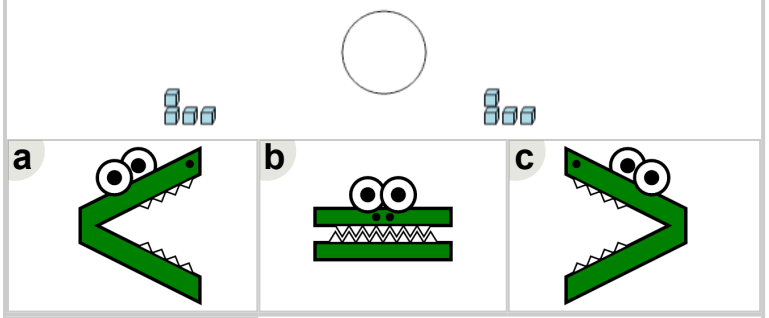
2 Which way would the alligator face to eat the largest set of blocks?



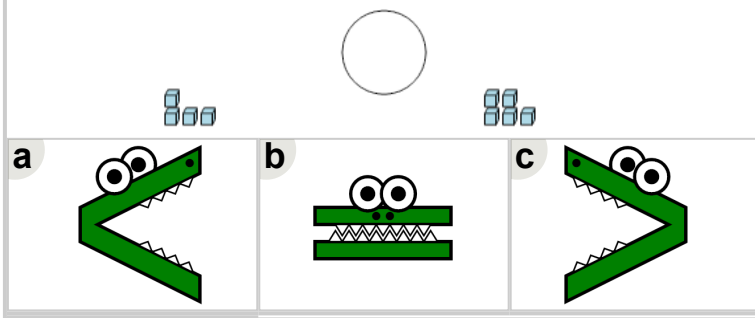
1 Which way would the alligator face to eat the largest set of blocks?



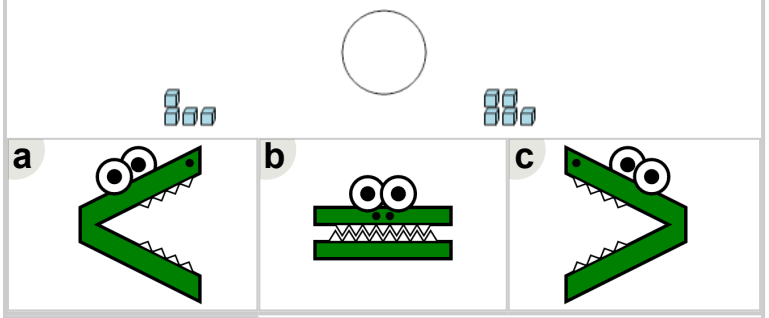
3 Which way would the alligator face to eat the largest set of blocks?



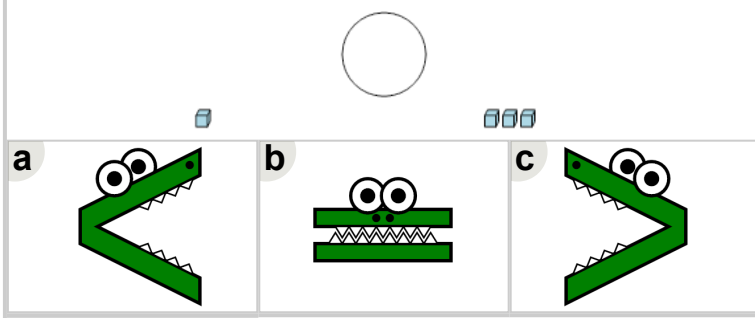
4 Which way would the alligator face to eat the largest set of blocks?



5 Which way would the alligator face to eat the largest set of blocks?



6 Which way would the alligator face to eat the largest set of blocks?



7 Which way would the alligator face to eat the largest set of blocks?

